

Grade 7 First Term Test - 2019 61 E

Name GEOGRAPHY - I 2 hours

Important : • Answer all the questions

- Answer all the questions
• Write the most suitable answer on the given space for question no 01 to 05

- 01. The surface area of the Earth is million km² (510 / 610 / 560)
02. Longitude 180° is used to draw the (Greenwich line / Date line/ equator)
03. 71% of the surface of the Earth is covered by (water/ land/ oceans)
04. The second largest continent among the continents is the continent of (Africa / North America / South America)
05. The extends up to 12 nautical miles from the coast. (Exclusive Economic zone/ Territorial Sea Limit/ Contagious sea)

• If the following statements are correct put (✓) if not put (✗) for question no 6 to 10

- 06. Latitudes are drawn from East to West and parrell to the equator. ()
07. The Earth is a spherical object and it is a full sphere. ()
08. The International Date Line is a straight line . ()
09. Showing the location of a country with reference to longitudes and latitudes is called the specific location. ()
10. Sri Lanka which is an island receives a uniform rainfall throughout the year ()

• Underline the most suitable answer for question no 11 to 15

- 11. The name for 66 1/2° North latitude is,
1. Tropic of cancer 2. Tropic of capricorn
3. Arctic circle 4. Antarctic circle
12. The continent that the Japanese islands belong to is,
1. The continent of Europe 2. The continent of Asia
3. The continent of Australia 4. The continent of North America

13. What is the method that is occurred rainfall due to the air disturbances in the bay of Bengal?
 1. Conventional 2. South West monsoon
 3. Cyclone 4. North East monsoon
14. A relief feature that can be seen in the intermediate plain is,
 1. Gap 2. Ridges 3. Valley 4. lagoon
15. A country belong to the continent of Europe is,
 1. China 2. Libia 3. France 4. Brazil

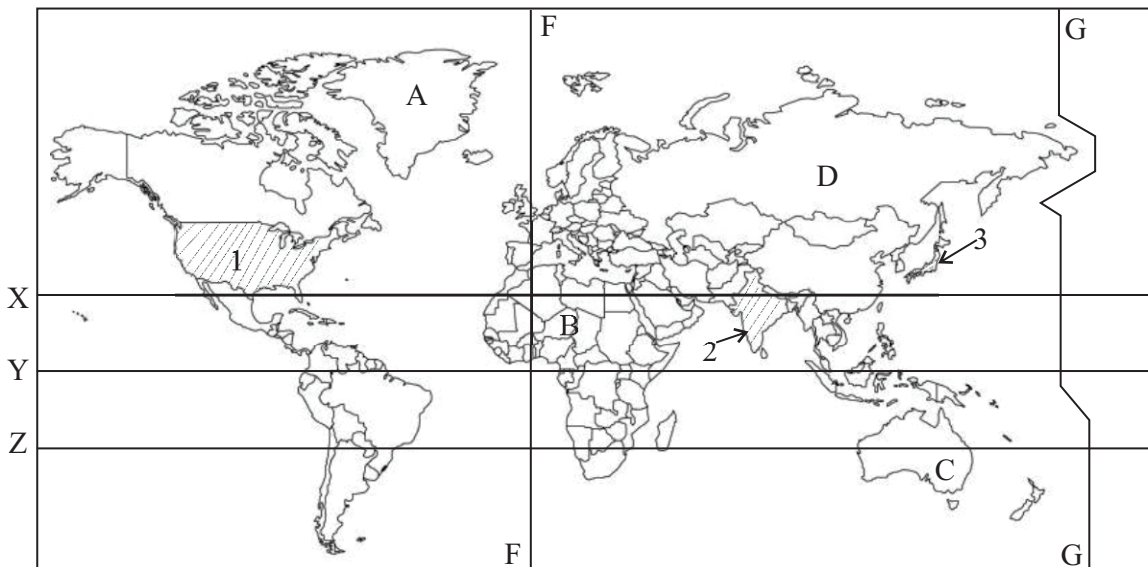
● Write the most suitable answer on the given space for question no 16 to 20.

16. The Earth takes 24 hours or one to rotate around its own axis.
17. The equatorial circumference is than the polar circumference.
18. Generally Sri Lanka has a weather during February and August months.
19. are large land mass surrounded by oceans.
20. Sri Lanka is located near the equator in the zone, between the tropic of cancer and the tropic of capricorn. (2x20 = 40 marks)

Part II

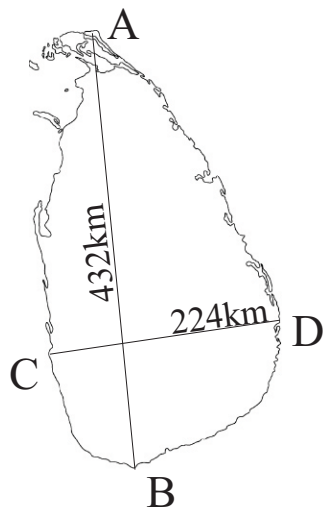
● Answer five questions including the first question. First question is compulsory.

(01) A. Answer the questions using the given map of the world.



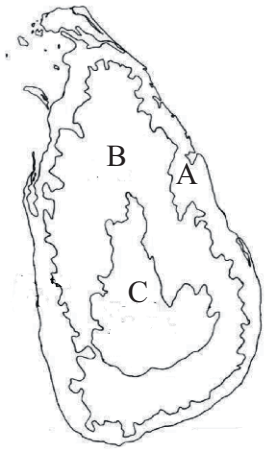
- i. Name the largest island in the world shown by letter A (2 marks)
- ii. What is the continent that can be seen as a one country? Write the letter of it. (2 marks)
- iii. Name the three countries that are shown by number 1,2 and 3 (3 marks)
- iv. Name the longitudinal lines shown by letters F and G (2 marks)
- v. Name the latitudinal lines shown by letters X,Y, Z (3 marks)

B. Study the following map of the area of Sri Lanka and Name the places shown by letters A,B,C & D (4 marks)



- A -
- B -
- C -
- D -

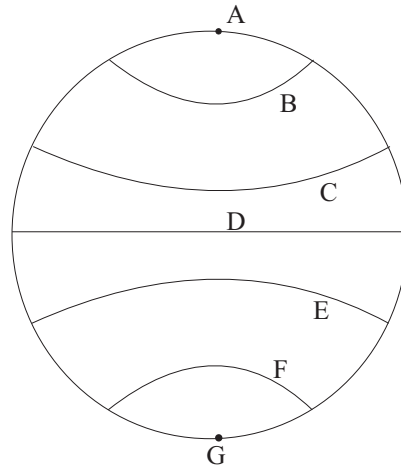
C. Study the given map of the relief zones of Sri Lanka and answer the following question.



- i. Name the relief zones shown by letters A, B and C respectively. (3 marks)
- ii. Write 3 relief features that can be seen in the 'A' relief zone. (3 marks)
- iii. Following relief features can be seen in the B and C relief zones. Name the relief zone in front of them. (3 marks)

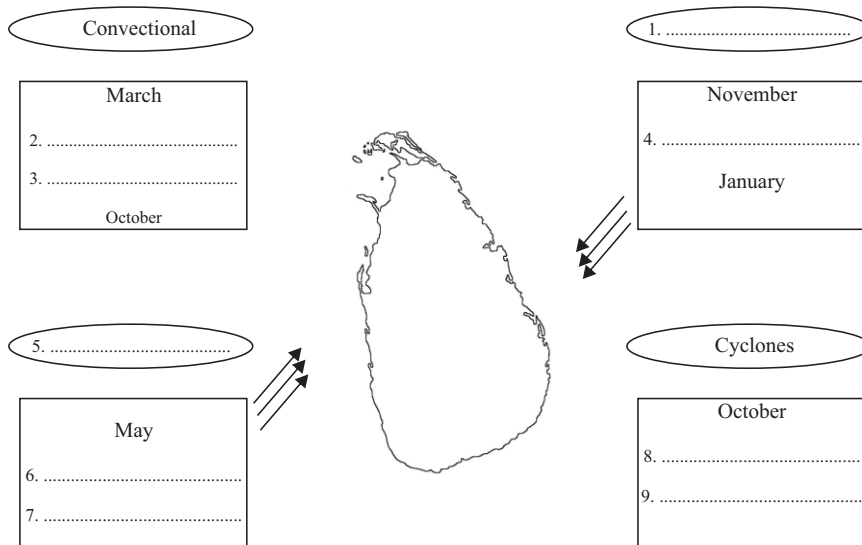
- 1. plateaus -
- 2. Residual hills -
- 3. Water falls -
- 4. Mountain ranges -
- 5. Ridges - (5 marks)

(03) Answer the following questions using the given geographical global.



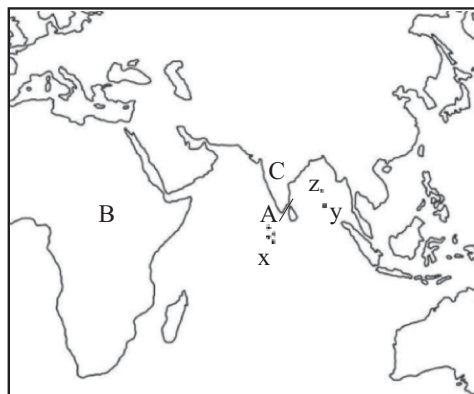
- i. What is the letter that shows the equator? (2 marks)
- ii. Name the latitude shown by letter C and write the value of it. (2 marks)
- iii. Name the latitude shown by letter F and write the value of it. (2 marks)
- iv. Write 2 importance of above mentioned latitudes. (2 marks)
- v. Write the location of Sri Lanka regarding the latitudes and longitudes. (3 marks)

(04) Complete the following chart regarding the methods of receiving rainfall in Sri Lanka.




- ii. Write 2 other names for convectional rain. (2 marks)

(05) Following map shows the Relative location of Sri Lanka. Study it and answer the following questions.



- i. Name the continent in the North of Sri Lanka and the ocean in the south of Sri Lanka. (2 marks)
- ii. Name the country shown by letter 'C' (2 marks)
- iii. Letter A shows the sea strip that separates Sri Lanka from India. Name it. (2 marks)
- iv. Nicobar, Maldives and Andaman islands are shown by letters x,y and z. Name x,y,z respectively. (3 marks)
- v. Letter B shows the continent that is located in the West of Sri Lanka. Name it (2 marks)

(06)



Across -

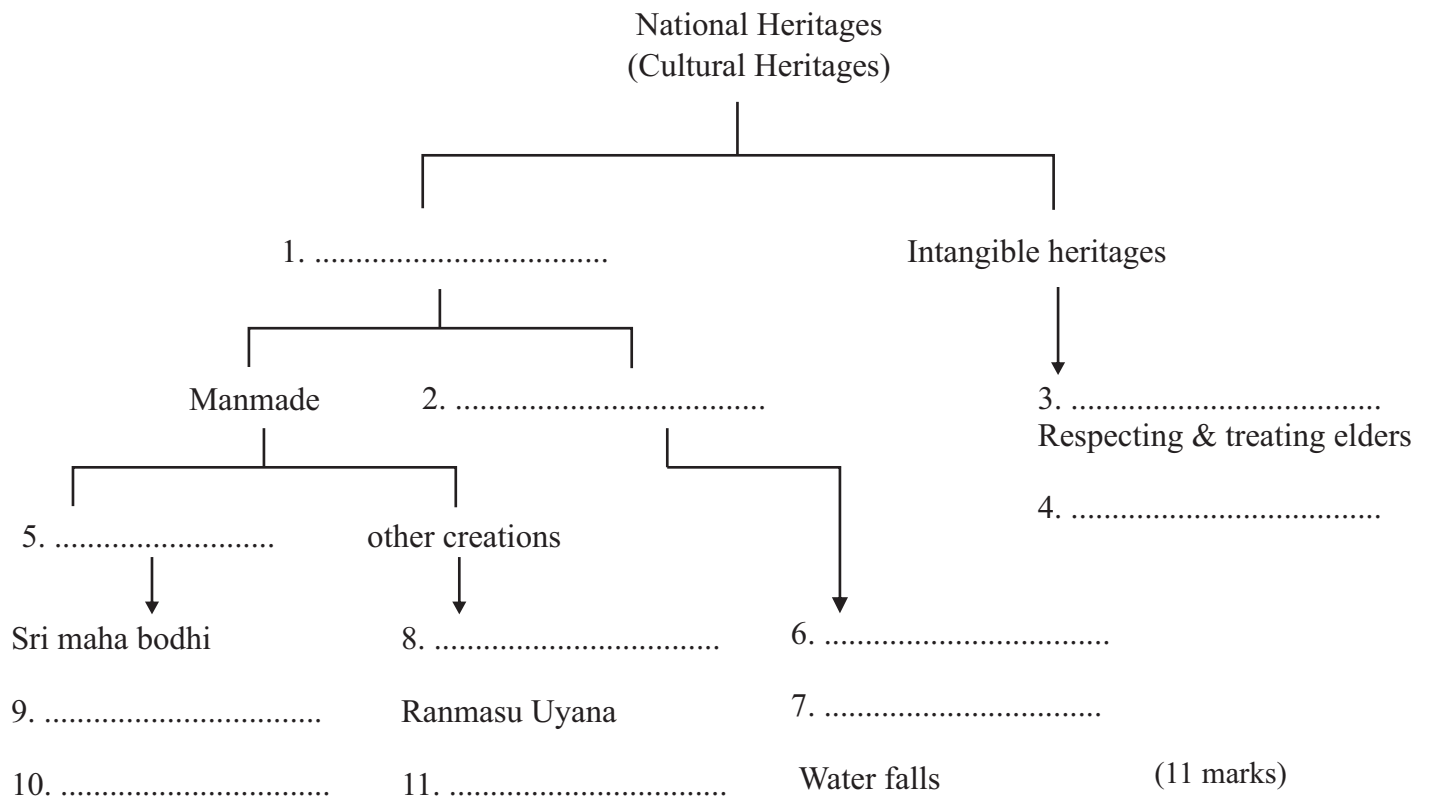
1. Sri Lanka is located in this climatic zone.
2. The small water bodies located close to continents and inland areas are called,
3. The latitudinal line which draws horizontally in the middle of the geographical globe.
4. A kind of plants that can be seen around the lagoons and the river mouths.
5. A relief feature that can be seen in the central hills.
6. An internal sea in the continent of Asia.
7. A small land area surrounded by water.

Down -

8. The vegetation can be seen in the plateau area.
9. Name for the movement of the Earth around the sun.
10. 0° longitude is drawn across this city.
11. The fifth largest continent in the world.

(1x11 = 11 marks)

(07) Complete the following chart using the national heritages of Sri Lanka.



First Term Test - 2019
Geography Grade 07
(Answers)
Part I

1 - 510	6 - ✓	11 - 3	16 - day
2 - 180'	7 - ✗	12 - 2	17 - larger
3 - water	8 - ✗	13 - 2	18 - dry
4 - continent of Africa	9 - ✓	14 - 2	19 - continent
5 - Territorial sea limit	10 - ✓	15 - 3	20 - Tropical (2x20 = 40 marks)

Part II

- (01) I. Greenland
 ii. letter C
 iii. 1. USA
 2. India
 3. Japan
 iv. Greenwich Prime meridian
 v. x - Tropic of cancer
 y - equator
 z - Tropic of capricorn
 vi. A - Point pedro
 B - Dondra head
 C - Colombo
 D - Sangamankanda point
- (02) i. A - Coastalplain
 B - Intermediate plain
 C - Central hill
 ii. Bays, lagoons, points, river mouths, Delta
 iii. 1. C - Central hills
 2. B - Intermediate plain
 3. C - Central hill
 4. C - Central hill
 5. B - Intermediate plain
- (03) I. D
 ii. Tropic of cancer $23\frac{1}{2}^{\circ}$
 iii. Antarctic circle $66\frac{1}{2}^{\circ}$
 iv. can identify the location correctly , to show the boundaries of the countries,
 to separate the areas.
 v. 5° - 10° North latitude
 79° - 82° East longitude

(marks - N.L/ E.L/ - 1 marks

5° - 10° - 1 marks

79° - 82°

- 1 marks
(3 marks)

- (04) i. 1. North East monsoon rain
2. April
3. September
4. December
5. South west monsoon
6. June
7. July
8. November
9. December

ii. Evening rains

- (05) i. Continent of Asia
Indian ocean

(1 x 2 = 2 marks)

ii. India (2 marks)

iii. Palk strait (2 marks)

iv. x - Maldives

y - Nicobar islands

z - Andaman islands (1x3 - 3 marks)

v. Continent of Africa (2 marks)

(06) **Across**

1. Tropical

2. sea

3. equator

4. Mangroves

5. Valleys

6. Caspian

7. Island

Down

8. patanas

9. revolution

10. Greenwich

11. Antarctic

(1x11 - 11 marks)

(07) 1. Tangible heritages

2. Natural

3. Hospitality / Compliments

4. Customs, manners

5. Religious centres

6 - 7 - Sinharaja / Namal Uyana / Hikkaduwa coast / Hot water springs

8 - 11 - Sigiriya / Jaffna fort / Galle fort / Tanks and irrigation works

9-10 Madu church / Kataragama sacred city / Nallur kovil / Mosques (1x11 - 11 marks)