

<b>Grade 7</b>	<b>First Term Test - 2019</b>	<table border="1" style="display: inline-table; border-collapse: collapse;"> <tr> <td style="padding: 5px;"><b>40</b></td> <td style="padding: 5px;"><b>E</b></td> </tr> </table>	<b>40</b>	<b>E</b>
<b>40</b>	<b>E</b>			

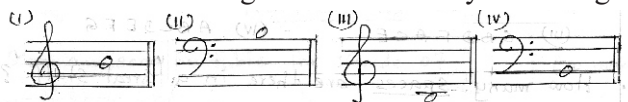
<b>Western Music</b>	<b>Time Two Hours</b>
----------------------	-----------------------

**Important**  
 Answer all questions on this paper itself

**Part I**

Underline the most suitable answer

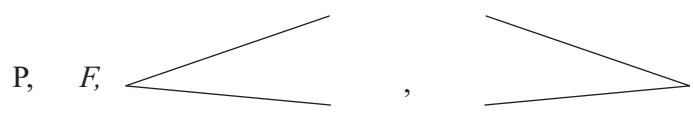
01. Which of the following is the correct way of writing the musical alphabet ?  
 (i) E G B D F A C      (ii) A C E G B D      (iii) G B D F A C E      (iv) A B C D E F G
02. How many spaces are there in a "Great staff" ?  
 (i) 8      (ii) 9      (iii) 10      (iv) 11
03. Which of the following is an unpleasant sound ?  
 (i) Rustling of the leaves      (ii) Car horns  
 (iii) Birds singing      (iv) Musical door bells
04. How many quavers are there in a semibreve ?  
 (i) 2      (ii) 4      (iii) 8      (iv) 16
05. Which of the following is heard during vesak ?  
 (i) Singing of Hymns      (ii) Singing of carols  
 (iii) Bhakthi Gee      (iv) Singing Bhajan
06. A white note with a stem is called,  
 (i) Minim      (ii) Crotchet      (iii) Quaver      (iv) Semibreve
07. Which of the following instruments is used in the Hindu music ?  
 (i) Geta beraya      (ii) Bass Drum      (iii) Side drum      (iv) Mrudangam
08. Which of the following Songs is in Triple time ?  
 (i) Fais do do      (ii) Lightly Row  
 (iii) Brother John      (iv) Mary had a little lamp
09. Which of the following is the correct way of writing "B" above the staff ?



10. Which one of the following is a "Great staff" ?

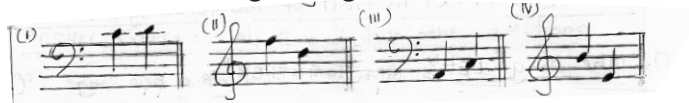


11. which answer is written in correct order for the following dynamics ?



- (i) Piano, Forte, decrescendo, crescendo.
- (ii) Piano, Forte, , crescendo, decrescendo.
- (iii) Forte, Piano, crescendo, decrescendo.
- (iv) Forte, Piano, decrescendo, crescendo.

12. Which of the following has leger line notes ?



13. Which religion associates with "Hymns" ?


- (i) Buddhism
- (ii) Hinduism
- (iii) Christianity
- (iv) Islam

14. How many notes are there in a scale?


- (i) 6
- (ii) 8
- (iii) 9
- (iv) 10

15. Which answer is written in correct order for the following rests?

- (i) Semibreve, Crotchet, Minim, Quaver.
- (ii) Crotchet, Quaver, Minim, Semibreve.
- (iii) Crotchet, Quaver, Semibreve, Minim.
- (iv) Quaver, Crotchet, Minim, Semibreve.



16. What is the correct order when writing musical signs and symbols?



Mark (✓) or (x) in front of the following statement

- 17. The song "LETS GET TOGETHER" is a new song ( )
- 18. This note is "A" on Recorder ( )



- 19. The Music "Air on G string" belongs to New music by J. S. Bach ( )
- 20. "♮" This sign is used for Natural ( )

(1 x 20 = 20)

## Part II

Answer Questions No 1 and two other questions

1.(a) Read the given music score and answer the following questions.


**Menuet**  
JOHANN SEBASTIAN BACH (1685-1750)  
BWV Anh. 114

- (i) Write the title of this music.....
- (ii) What are the 2 clefs used in this melody .....
- (iii) What is the time signature?.....
- (iv) How many bars are there in the melody.....
- (v) What are the "dots" used in bar number 9, 10, 11, 12 in treble staff ?( legato or staccato)  
..... (1 x 5 = 5)

(b) Fill in the blanks with the suitable words from the brackets  
(Row your boat / National Anthem / Pleasant sound / Geta beraya / string )

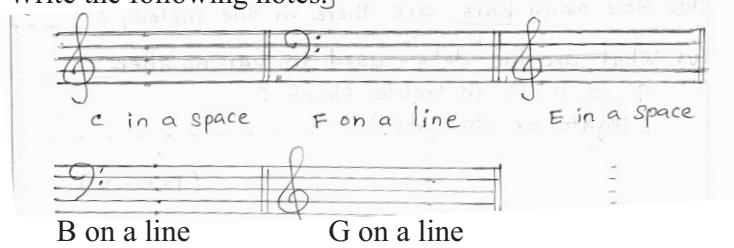
- (i) The ring tone of mobile phone is .....
- (ii) It is a section of the Orchestra.....
- (iii) What is the music we hear in the morning assembly ?.....
- (iv) We can sing this song in rounds.....
- (v) It's a Sri Lankan drum..... (1 x 5 = 5)

2. (a) Name the leger line note



(1 x 5 = 5)

(b) Write the following notes,



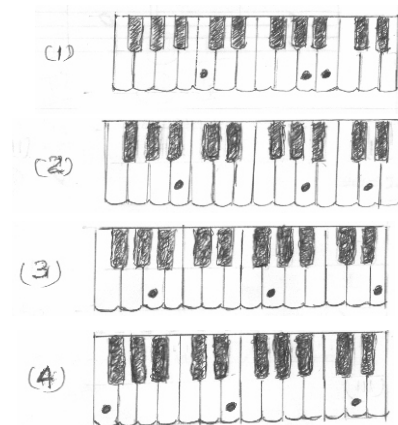
(1 x 5 = 5)

3.a Match A with B

**A**


- (i) A G E
- (ii) F E D
- (iii) C A B
- (iv) B A D

**B**




(1 x 4 = 4)

b. i. In the Empty bar write a note a semitone above the given note.



(1 x 3 = 3)

ii. In the empty bar write a note a Tone below the given note



(1 x 3 = 3)

4. (a) In each empty bar write a rest in value to the given note.



(1 x 4 = 4)

(b) Name these Instruments.

(1 x 6 = 6)

(i)



(ii)



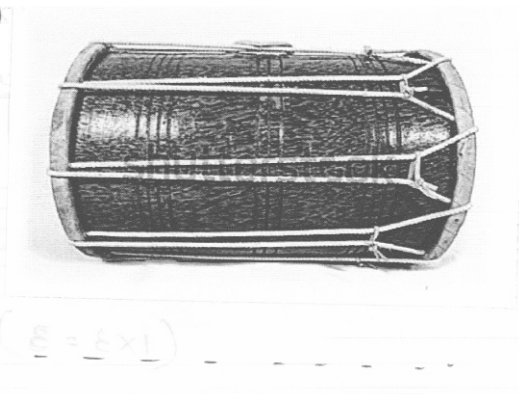
(iii)



(iv)



(v)



(vi)



First Term Test - 2019  
 Grade 07 Western Music  
 Answer Sheet

**Part I**


(01) (iv)	(06) (i)	(11)(ii)	(16) (i)	
(02) (iii)	(07) (iv)	(12) (i)	(17) (✓)	
(03) (ii)	(08) (i)	(13) (iii)	(18) (✓)	
(04) (iii)	(09) (ii)	(14) (ii)	(19) (x)	(1 x 20 = 20)
(05) (iii)	(10) (ii)	(15) (iv)	(20) (✓)	

**Part II**

(1)a. i. Menuet iv 16	ii. Trebleclef, Bass clef v. Staccato	iii. $\frac{3}{4}$	(1 x 5 = 5)
b. i. Pleasant sound iv. Row your boat	ii. string v. Geta beraya	iii. National Anthem	(1 x 5 = 5)

(2)(a) A, D, C, B, E (1 x 5 = 5)


(b)



(1 x 5 = 5)


(1 x 5 = 5)

(3) (a) (i)3	(ii) 4	(iii) 1	(iv) 2	(1 x 4 = 4)
--------------	--------	---------	--------	-------------

(b)(i)		(1 x 3 = 3)
--------	--------------------------------------------------------------------------------------	-------------

(1 x 3 = 3)

(ii)



(1 x 3 = 3)

(4) (a)		(1 x 4 = 4)
---------	--------------------------------------------------------------------------------------	-------------

(1 x 4 = 4)

(b)			
(i) Tammattama	(ii) Piano	(iii) Violin	
(iv) Natheswaram	(v) Davula	(vi) Recorder	(1 x 6 = 6)