

සියලුම හිමිකම් ඇවිරිණි]  
முழுப் பதிப்புரிமையுடையது]  
All Rights Reserved]

ශ්‍රී ලංකා විභාග දෙපාර්තමේන්තුව / இலங்கைப் பரீட்சைத் திணைக்களம் / Department of Examinations, Sri Lanka


Competitive Examination for Admission of students to Sri Lanka  
Law College for Academic year 2016 - September 2015

(01) Language Skills (English)

Three hours

Instructions to Candidates

Very Important :



\* Answer scripts where the numbers are not written  
as indicated below will not be marked/evaluated.

1 2 3 4

Write your Index Number here and  
on page 3 in the spaces indicated.

.....

Checked as correct

.....

Invigilator's Initials

Important :

- \* This paper consists of 38 questions on 08 pages.
- \* Before answering the paper arrange all the pages in order.
- \* Answer all questions on this paper itself.
- \* The time allowed for this paper is three hours.
- \* Commence answering only after the Centre Supervisor's announcement.
- \* Instructions given should be strictly followed in answering this paper and marks will not be awarded for answers not in accordance with these instructions.
- \* Even if you are not attempting the paper hand it over to the Supervisor.
- \* Write the answers clearly and legibly in blue or black ink only and not in pencil.
- \* It is an offence to remove this paper from the examination hall or turn out photocopies of the same.
- \* Answer scripts with illegible figures, illegible handwriting, those where erasing fluid has been used and written in pencil will not be marked/evaluated.

For Examiner's use only

Page No.	Question Nos.	Marks awarded
2	1 - 16	
3	17 - 35	
4 - 5	36	
5 - 6	37	
7 - 8	38	
<b>Total</b>		

Final Score

In figures	
In words	

Marking Examiner	
Checked by	

● In the questions from No 1 to 3, **underline** the correct word.

- 1. primery, crockery, momentery
- 2. partical, practical, quarral
- 3. intension, expansion, nutrision

(03 marks)

● In each of the questions from No 4 to 6, re-arrange the words in alphabetical order.

- 4. cinnamon, circuit, cigarette, cipher, cinema
- .....

- 5. fumigate, fulminate, fulcrum, fumble, full
- .....

- 6. legality, legend, legally, legacy, legate
- .....

(03 marks)

● In each of the questions from No. 7 to 11, **underline** the correct verb from those given in the brackets.

- 7. When did you (returned, returning, returns, return) from abroad?
- 8. One of the boys (have, has, is, are) taken my pen. It is missing.
- 9. The drunken driver (will be arrested, was arrest, was arrested, is arrested) last evening.
- 10. The baby (was crying, is crying, cried, will cry). It must be hungry.
- 11. These children (will take, will be taking, will be taken, are taken) to the museum next Monday.

(05 marks)


● In the questions from No. 12 to 15, fill in each blank in the following text using the **correct preposition** given within brackets.

An old woman went out one night 12. .... (by, for, with) a large bucket to fetch water  
13. .... (in, from, by) a stream not very far away. It was a very dark night and as she went  
she tripped 14. .... (over, on, into) a rock which lay 15. .... (on, in, under) her  
path and hurt her foot.

(04 marks)

● In the questions from No. 16 to 18, explain the given set of words in your own words and construct a sentence for each to make your meaning clear.

- 16. beat about the bush
- .....
- .....
- .....
- .....



2

Index No : .....

17. at the drop of a hat

.....  
.....  
.....  
.....

18. the best of both worlds

.....  
.....  
.....  
.....

(03 marks)

- In the questions from No. 19 to 30, fill in the blank with a suitable word. Use only one word in each blank.

Owls are nocturnal birds. Like bats and other 19. ...., they rest during the 20. ...., in an empty building, 21. .... hollow tree, or other 22. .... places and go out at night in search of 23. .... They are able to 24. .... this well at night for several 25. .... They have large 26. .... with which they can see 27. .... in the dark. And it is 28. .... their eyes are so large 29. .... they do not like being out in the bright 30. .... during the day. Owls' eyes differ from those of other birds in other respect too.

(12 marks)

- In the questions from No. 31 to 32, select the grammatically correct sentence and write its number on the dotted line provided against each question.

- 31. (1) We would not go out if it rains.  
(2) We would not go out if it is raining.  
(3) We will not go out if it rained.  
(4) We will not go out if it rains.

(.....)

- 32. (1) It was Kavindu who broke the vase.  
(2) It is Kavindu who broke the vase.  
(3) It was Kavindu who breaks the vase.  
(4) It is Kavindu who break the vase.

(.....)  
(02 marks)

- Give one word for the expressions given in the questions from No. 33 to 35.

- 33. The bringing of something into use or operation for the first time .....
- 34. A group of people in a law court who have been chosen to decide whether an accused is guilty or not after listening to a case .....
- 35. The scientific study of the stars, planets etc. ....

(03 marks)



36. Read the following text and answer the questions given below.

If you stop Ted in the street and ask him the way he is always eager to direct you. He helps the aged, the blind, the crippled. **He** will rescue children in distress separated from their mothers in a crowd. At the scene of an accident he is among the first to restore calm, to comfort people, ring for ambulances, distribute hot sweet tea.

He will reprimand or report to the police anyone making himself a public nuisance or breaking the law. Ted has deep respect for the law.

If you say good morning to him he returns your greeting with a cheerful smile.

That is Ted.

At work he is willing, eager, he goes out of his way to please his boss. He stays behind in the evenings to give extra attention to his tasks and prepare for the following day. How courteous he is, how efficient!

In his conversation, he refers to his many friends, to his popularity among them.

"They will do anything for me", he says.

He tells you of the liftman at work who is always ready to take him to any floor, to give him service before all others; of the manager who calls him by his Christian name and gives him a friendly wink from time to time, there being definite understanding between them; of the Director who chats intimately with him in a manner which he does not adopt with the other members of the staff; of the shy young office girls who are delighted to be taken 'under his wing'; of the Chief Security Officer who, relaxing the principle of keeping aloof from the staff, invites him to his room for coffee, talking to him as an equal.

He likes to make it known that he is given certain privileges: he is allowed free time whenever he chooses; he is trusted, taken into the confidence of other, consulted on personal problems. He has so many friends. If you spend enough time with him you soon learn that he seems to have more friends than most people; you learn too of his illustrious relatives, of famous people who have spoken to him or corresponded with him, of high-ranking officials in other countries whom he has known intimately. In case you do not believe him (but who would doubt his word?) he has a supply of anecdotes, dates, Christian names. And in all his stories, he features as the man with many friends, the man to whom people turn for advice and comfort.

Then why is he so alone? Why does he go to bed each night hoping for immediate sleep to ward off his loneliness? Why does he go every Sunday afternoon to the pictures and sit alone in the dark through two showings of the programme, and then return to his deserted flat and once more go to bed, trying to evade the loneliness?

He hasn't a friend in the world, and he knows it.

When his back is turned they label him bumptious, over-bearing, conceited, nosey-parker, poke-nose, opinionated, bigoted .....

Over his dead body, before he is taken to be buried in the grave of a suicide, they praise him as helpful, kind, courteous, willing, conscientious, a noble and good man .....

Which judgement is correct? Is there a correct one? How can one be judged truly, unless, like Ted, one hires the services of the Advocate Death?

(i) (a) What impression is given of Ted in the first two paragraphs?

.....  
(01 mark)

- (b) What evidence is given that at work Ted is 'willing, eager'?
- ..... (01 mark)
- (ii) (a) What privileges does Ted claims to have been given?
- ..... (01 mark)
- (b) What evidence does Ted give of the many famous friends he has?
- ..... (01 mark)
- (iii) (a) What does Ted do at weekends to try to avoid his loneliness?
- ..... (01 mark)
- (b) How did Ted die?
- ..... (01 mark)
- (iv) (a) Why did people speak differently of him then?
- ..... (02 marks)
- (b) What is your opinion of Ted?
- ..... (02 marks)
- (v) Explain the meaning of these words / phrases in bold print as they are used in the story.
- (a) illustrious - .....
- (b) anecdotes - .....
- (c) evade - ..... (03 marks)
- (vi) Who or what do the following pronouns underlined in the text refer to?
- (a) He - .....
- (b) it - ..... (02 marks)

37. Read the following text and summarize it in to **one third** of its length and give a **suitable title**. **Indicate the number of words used at the end.**

At any given period every community will have its own broad but distinct sense of morality, although it will change, sometimes drastically, over time. Even when we make comments such as "Morals are declining in the West", we are referring to a form of morality prevalent in the West, although it is different to the morality followed by us and may not be approved by us.

In a similar way to religion there is clearly an overlap between law and morality. Many acts that are considered immoral by the vast majority of people, such as killing and stealing, are also illegal. Law and morality thus have striking similarities and are interconnected. They are both codes of conduct for the smooth functioning of society. They lay down standards







Handwriting practice area consisting of 25 horizontal dotted lines.

(25 marks)

\*\*\*





සියලුම හිමිකම් ඇවිරිණි]  
முழுப் பதிப்புரிமையுடையது]  
All Rights Reserved]

ශ්‍රී ලංකා විභාග දෙපාර්තමේන්තුව / இலங்கைப் பரீட்சைத் திணைக்களம் / Department of Examinations, Sri Lanka

Competitive Examination for Admission of students to Sri Lanka  
Law College for Academic year 2016 - September 2015

(02) General Knowledge and Intelligence

Two hours

Instructions to Candidates

Very Important :

Do not use Pencil  
to write answers.



\* Answer scripts where the numbers are not written as indicated below will not be marked / evaluated.

1 2 3 4

Write your Index Number here and  
on page 3 and 5 on the spaces  
indicated.

.....

Checked as correct

.....

Invigilator's Initials

Important :

- \* This paper consists of 100 questions on 12 pages.
- \* Before answering the paper arrange all the pages in order.
- \* Answer all questions on this paper itself.
- \* The time allowed is Two hours.
- \* Commence answering only after the Centre Supervisor's announcement.
- \* Instructions given should be strictly followed in answering this paper and marks will not be awarded for answers not in accordance with these instructions.
- \* Calculators are not allowed.
- \* Even if you are not attempting the paper hand it over to the Supervisor.
- \* Write the answers clearly and legibly in blue or black ink only and not in pencil.
- \* It is an offence to remove this paper from the examination hall or turn out photocopies of the same.
- \* Answer scripts with illegible figures, illegible handwriting, those where erasing fluid has been used and written in pencil will not be marked / evaluated.

For Examiner's use only

Page No.	Question Nos.	Marks awarded
2	1 - 8	
3	9 - 18	
4	19 - 30	
5	31 - 43	
6	44 - 55	
7	56 - 62	
8	63 - 70	
9	71 - 76	
10	77 - 84	
11	85 - 91	
12	92 - 100	
<b>Total</b>		

Final Score

In figures	
In words	
Marking Examiner	
Checked by	

**Part I – General Knowledge**

● For each of the questions No. 1 to 30, select the **correct or most appropriate** answer and write the **number** of the relevant choice **on the dotted line** provided against the question.

1. Which one of the following shows the institutions that deal with the responsibilities of legislation, their implementation and the interpretation in proper order?  
(1) judiciary, executive, legislative                      (2) legislative, executive, judiciary  
(3) legislative, judiciary, executive                      (4) executive, legislative, judiciary                      (.....)
2. Out of the key social indicators in the Annual Report of the Central Bank of Sri Lanka in 2014 which one is the **incorrect** social indicator about the quality of life of a Sri Lankan at present?  
(1) Literacy rate 92.5%  
(2) Life expectancy at birth 74.3  
(3) Average daily kilo calorie intake 2111  
(4) Average monthly income Rs. 30 814                      (.....)
3. According to the 1978 Constitution of the Democratic Socialist Republic of Sri Lanka which one of the following is the correct statement about the constitution of the Supreme Court of Sri Lanka?  
(1) It shall consist of the Chief Justice and of not less than four and not more than nine other judges.  
(2) It shall consist of the Chief Justice and of not less than five and not more than eight other judges.  
(3) It shall consist of the Chief Justice and of not less than six and not more than ten other judges.  
(4) It shall consist of the Chief Justice and of not less than seven and not more than twelve other judges.                      (.....)
4. During the tenure of which British Governor was the historic Kandyn Convention of 1815 signed?  
(1) Sir Thomas Maitland                      (2) Sir Fredrick North  
(3) Sir Robert Brownrigg                      (4) Sir Edward Barnes                      (.....)
5. From which year was the Tamil Language recognized as an Official Language of Sri Lanka?  
(1) 1956                      (2) 1965                      (3) 1978                      (4) 1987                      (.....)
6. According to the present law of Sri Lanka who is the authority of appointing a Justice of the Peace?  
(1) The Attorney-General                      (2) The Chief Justice  
(3) The Minister of Justice                      (4) The Prime Minister                      (.....)
7. According to the Census carried out by the Department of Census and Statistics in 2012, which of the following **two** Districts have a population less than 100 000?  
(1) Mannar, Mullaitivu                      (2) Kilinochchi, Vavuniya  
(3) Mullaitivu, Trincomalee                      (4) Mannar, Ampara                      (.....)
8. Which one of the following is the Order in the law that states that “a person who has been arrested should not be kept in prison longer than a particular period of time unless a judge in Court has decided that it is right”?  
(1) Certiorari                      (2) Habeas Corpus                      (3) Mandamus                      (4) Quo-warranto                      (.....)

9. How many members should be there in the Constitutional Council to be established under the 19<sup>th</sup> Amendment to the Constitution of the Democratic Socialist Republic of Sri Lanka approved in the Parliament in May 2015?  
(1) 8                      (2) 10                      (3) 12                      (4) 15                      (.....)
10. Which of the Constitutional Reforms adopted during the British Rule in Sri Lanka established the first Legislative Council in Sri Lanka?  
(1) Colebrooke                      (2) Manning  
(3) Donoughmore                      (4) Soulbury                      (.....)
11. Which one of the following represents the **most** number of significant years in the history of Sri Lanka?  
(1) 1505 , 1796 , 1815 , 1848 , 1931 , 1948 , 1956 , 1972  
(2) 1505 , 1796 , 1815 , 1818 , 1933 , 1948 , 1978 , 1994  
(3) 1505 , 1796 , 1802 , 1818 , 1848 , 1948 , 1972 , 1994  
(4) 1505 , 1796 , 1802 , 1831 , 1931 , 1948 , 1956 , 1978                      (.....)
12. Which is **not** an institution established to resolve disputes outside the Judicial System in Sri Lanka?  
(1) Labour Tribunal                      (2) Human Rights Commission  
(3) Reconciliation Board                      (4) Legal Aid Commission                      (.....)
13. What was the name used by the Arab traders to identify Sri Lanka during the Medieval Times?  
(1) Taprobane                      (2) Serendib                      (3) Ceilo                      (4) Simundu                      (.....)
14. Which one of the following holds an identification parade to identify the correct accused?  
(1) A Superintendent of Police  
(2) A Magistrate  
(3) A Judge of the High Court  
(4) A Judge of a Superior Court                      (.....)
15. In which of the following Cultures was the Philosophy that "Nature should be conquered" originated?  
(1) Chinese                      (2) Islamic  
(3) Indian                      (4) European                      (.....)
16. Which one of the following books was instrumental in giving rise to a revolutionary political ideology among the peoples of the world?  
(1) The Republic                      (2) The Prince  
(3) Das Kapital                      (4) Mein Kampf                      (.....)
17. Which one of the following is a **mismatch**?  
(1) Salmon Rushdie – Novels                      (2) Bertolt Brecht – Drama  
(3) Amarthya Sen – Music                      (4) Akira Kurosava – Cinema                      (.....)
18. Which one of the following is the acronym for the Indian Intelligence Service?  
(1) ISI                      (2) RAW                      (3) KGB                      (4) FBI                      (.....)

19. Who made the statement that the Law, "eye for an eye" makes the whole world blind?  
(1) Mahatma Gandhi (2) Nelson Mandela  
(3) Mother Theresa (4) Martin Luther King (.....)
20. Which of the following is **not** an Indicator included in the Human Development Index introduced by the UNDP in 1990?  
(1) Life expectancy (2) Education  
(3) Gross National Revenue (4) Democracy (.....)
21. Which one of the following represents only the countries that have legalized euthanasia by persons suffering from an incurable disease?  
(1) Switzerland, Belgium, Netherlands, Luxembourg  
(2) Switzerland, Belgium, Netherlands, Great Britain  
(3) Switzerland, Belgium, Netherlands, Italy  
(4) Switzerland, Belgium, Netherlands, Portugal (.....)
22. In which year was the Universal Declaration of Human Rights proclaimed by the United Nations Organization?  
(1) 1945 (2) 1946 (3) 1947 (4) 1948 (.....)
23. Which country proposed to hold the World Football Tournament in 2016?  
(1) Columbia (2) Germany (3) Spain (4) Argentina (.....)
24. What is the base involved in the well known Chilcot Report of Great Britain?  
(1) Invasion of Iraq (2) Migrants from Middle-East Countries  
(3) Code of Ethics for Parliamentarians (4) Referendum of Scotland (.....)
25. Which of the following is known as the "Digital-Divide"?  
(1) a recently developed a Mathematical Formula.  
(2) a new technological device introduced in USA.  
(3) a division between technologically developed and undeveloped countries.  
(4) a new mobile phone classification. (.....)
26. What is the largest organ of the human body?  
(1) liver (2) brain (3) lung (4) heart (.....)
27. According to the World History, which of the following is the state which had invaded the most number of countries during the Colonial era?  
(1) Portugal (2) Spain (3) Great Britain (4) France (.....)
28. Which of the following correctly represents the five countries of BRICS?  
(1) Brazil, Russia, India, China, South Africa  
(2) Brazil, Russia, India, China, South Korea  
(3) Brazil, Russia, Indonesia, China, Saudi Arabia  
(4) Brazil, Russia, Iran, China, South Africa (.....)
29. What is the acronym for the United Nations Agency which names the World Heritage sites?  
(1) UNCHR (2) UNICEF (3) UNDP (4) UNESCO (.....)
30. What is the only planet that rotates from East to West in the Solar system?  
(1) Venus (2) Mars (3) Saturn (4) Neptune (.....)

● Write the correct answer in brief for each of the questions from No. 31 to 50, on the dotted line provided.

- 31. Who was the first Sri Lankan politician who held the office of the Prime Minister for four times?  
.....
- 32. In order to practice Law in Sri Lanka, what is the name of the Institution which it is compulsory for a Lawyer to be enrolled?  
.....
- 33. Who won the best inventor award at the Ray Wijewardhane memorial inventors awards ceremony held in August 2015?  
.....
- 34. What is the Ministry in which the Sri Lanka Police Department comes under?  
.....
- 35. What is the largest island belongs to Sri Lanka?  
.....
- 36. What is the name of the French Film that won a top honour at the 2015 Cannes Film Festival in which relates the story of three Sri Lankan Tamil refugees?  
.....
- 37. Who was the futurist who lived in Sri Lanka who created a revolution in world communication?  
.....
- 38. What is the required Quorum in a sitting of members in the Parliament of Sri Lanka at present?  
.....
- 39. What is the Government Department which has the power to accept the documents on Last Wills and the Power of Attorney?  
.....
- 40. What is believed to be the main Agrochemical for the chronic kidney disease that is widespread in the North Central Province in Sri Lanka?  
.....
- 41. What is the numeral which is not represented in the Roman numerals?  
.....
- 42. Who was the computer professional who leaked the classified confidential information of the National Security Agency of the United States of America?  
.....
- 43. What was the International Day which had the theme, "Seven Billion Dreams, One Planet, Consume with care" in this year?  
.....

44. Which country in Asia has a Peace Constitution?  
.....
45. To which country did the USA and the European union imposed embargoes recently, believing that it helped the Ukraine rebels?  
.....
46. In which Ocean does the imaginary International Date Line runs through?  
.....
47. According to the World Justice Project Index which Asian country ranks the highest in Rule of Law at present?  
.....
48. What is the most populated city of the world?  
.....
49. What is the Regional Organization that offers GSP trade benefits to the Developing countries of the world?  
.....
50. Who is the present High Commissioner for Human Rights of the United Nations Organization?  
.....

**Part II - Intelligence**

● Under each question from No. 51 to 55 three words with a certain relationship are given. Select the three words that show a closest relationship to the given three words and write the **number** of the relevant choice **on the dotted line** given against the question.

51. touch : grasp : release  
(1) sit : sleep : dream (2) blame : anger : disturbance  
(3) morning : night : daytime (4) smile : laugh : cry (.....)
52. hunting : enjoyment : pain  
(1) death : disease : fear (2) sport : training : enthusiasm  
(3) theft : profit : loss (4) rain : flood : drought (.....)
53. hand : body : finger  
(1) ball : bat : pitch (2) leaf : tree : seed  
(3) class : school : pupil (4) complaint : evidence : judgement (.....)
54. competition : victory : popularity  
(1) exercise : tiredness : rest (2) vaporization : cloud : rain  
(3) exhibition : creation : honour (4) orbit : revolution : movement (.....)
55. picture : clock : wall  
(1) pillow : mattress : bed (2) pen : pencil : exercise  
(3) police : court : law (4) chapter : sentence : letter (.....)



● Questions from No. 56 to 60 are based on the five statements I, II, III, IV and V about the relationship among the weight of the five rings A, B, C, D and E.

I. The weight of ring A is twice the weight of ring B.

II. The weight of ring B is four and half times the weight of ring C.

III. The weight of ring C is half the weight of ring D.

IV. The weight of ring D is half the weight of ring E.

V. The weight of ring E is less than the weight of ring A, but more than the weight of ring C.

According to this information select the correct answer for each question below and write the **number** of the relevant choice **on the dotted line** given against the question.

56. Which ring is the heaviest among the five rings?

- (1) A                      (2) B                      (3) C                      (4) D                      (.....)

57. What are the two rings that are less in weight than the ring E?

- (1) A and D              (2) B and C              (3) B and D              (4) C and D              (.....)

58. If these five rings are arranged from top to bottom according to the heaviest to the least heavy ring which ring would be in the fourth place from the top?

- (1) B                      (2) C                      (3) D                      (4) E                      (.....)

59. Which of the given statements is **not** necessary when arranging the five rings in the ascending order of their weights?

- (1) I                      (2) III                      (3) IV                      (4) V                      (.....)

60. Which of the following statements is definitely true?

- (1) The weight of ring B is less than the weight of ring D.  
(2) The weight of ring C is less than the weight of ring E.  
(3) The weight of ring D is less than the weight of ring C.  
(4) The weight of ring E is less than the weight of ring D.                      (.....)

● Under each question from No. 61 to 65 three statements I, II and III and four choices which describe the relationship that may exist between them are given. Out of them select the answer that best describes the relationship of the three statements and write the **number** of the relevant choice **on the dotted line** given against the question.

61. **Statement I** : Uthpala is a lady lawyer who has now passed the age of 40 years.

**Statement II** : Dinidu is married to a lady lawyer of more than 40 years old now.

**Statement III** : Uthpala reached the age of 40 years, after passing 15 years since she married Dinidu.

- (1) When I is true, III can be proved as true using II.  
(2) When I is true, II can be proved as true using III.  
(3) When II is true, III can be proved as true using I.  
(4) When II is true, III can be proved as false using I.                      (.....)

62. **Statement I** : Every student who studies in the Institute of Legal Education follows at least one of the courses Labour Law or Agreement Law.

**Statement II** : 75% of students of the Institute of Legal Education follow Agreement Law Course.

**Statement III** : 50% of students of the Institute of Legal Education follow Labour Law Course.

- (1) All I, II, III can be true at the same time.  
(2) If I is true, III will be false when II is true.  
(3) If I is true, III and II are definitely false.  
(4) Although I is true or false, if II is true III also should be true.                      (.....)



63. **Statement**    **I** : All Current Account holders are Savings Account holders.  
                          **II** : Sachini has only a Current Account.  
                          **III** : Asela has only a Savings Account.
- (1) When **I** becomes true, **II** becomes true and **III** becomes false.  
(2) When **I** becomes true, **II** becomes false and **III** becomes true.  
(3) When **I** becomes true, **II** and **III** becomes true at the same time.  
(4) When **I** becomes true, **II** and **III** becomes false at the same time. (.....)

64. **Statement**    **I** : Mr. Prathapasinghe has written many books on elements of law.  
                          **II** : The book "Elements of Laws of Administration" is written by Mr. Prathapasinghe.  
                          **III** : Mr. Prathapasinghe has written books only on historical evolution of law.
- (1) If **I** is true, **II** cannot be true.  
(2) If **I** and **II** are true, **III** also should be true.  
(3) **III** can be true only if **I** is false.  
(4) **I**, **II** and **III** can all be true at the same time. (.....)

65. **Statement**    **I** : Chethana was born on a Saturday.  
                          **II** : Last year, Chethana's birthday fell on a Saturday.  
                          **III** : Next year Chethana's birthday will not fall on a Saturday.
- (1) If **I** is true, **II** and **III** should also be true.  
(2) If **I** is false, **II** and **III** should also be false.  
(3) If **I** is false, **III** cannot be true.  
(4) Whether **I** is true or false, if **II** is true **III** should also be true. (.....)

● Select the correct answer for each question from No. 66 to 70 and write the **number** of the relevant choice on the dotted line given against the question.

66. On all week days a train leaves *P* railway station to *Q* railway station once every two and a half hours. On a certain occasion an announcement was made at the *P* railway station stating that a train left to *Q* railway station 40 minutes ago and the next train will leave at 1800 h. Accordingly, what could be the time the announcement was made?
- (1) 1600 h                      (2) 1610 h                      (3) 1620 h                      (4) 1640 h                      (.....)

67. In a row of students, Deepthi is the ninth from the left end. Kamani is the thirteenth from the right end in the same row. Later the two girls exchanged their places then the place of Deepthi changed to be the seventeenth from the left end. Accordingly, after changing the places what is the place of Kamani from the right end of the row?
- (1) 21                              (2) 23                              (3) 26                              (4) 29                              (.....)

68. Piumi and Chamodi are two friends who got appointments for two different posts on the sameday at the same place of work. The salary of Piumi is increased by 250 rupees annually and the salary of Chamodi is increased by 200 rupees annually. If their salaries come to the same level within five years, after how many years from the date of appointment would the difference of their salaries become 100 rupees?
- (1) 5                                      (2) 4                                      (3) 3                                      (4) 2                                      (.....)

69. If the speed of a car that runs 210 kilometres per hour is increased by 5 kilometres per hour the journey can be finished one hour early. Accordingly, what is the initial speed of the car in kilometres per hour?
- (1) 20                                      (2) 25                                      (3) 30                                      (4) 35                                      (.....)

70. A flock of birds are perched on the branches of two trees in such a way that any bird on any tree would have the same distance between any other bird on the same tree. What is the maximum number of birds that can be in this flock?
- (1) 4                                      (2) 6                                      (3) 8                                      (4) 10                                      (.....)





● Questions from No. 71 to 75 are based on the information on eight professionals living in a flat.

❖ In a three storeyed flat that consists of a ground floor, a first floor and a second floor there are thirteen houses comprising at least three houses or not more than six houses on each floor.

❖ Out of them no one is residing in five houses and in the other eight houses two lawyers, two engineers, three accountants and one doctor are residing in such a way that one professional is living in one house.

\* Out of the four houses in the second floor a lawyer is residing in one house and only one other professional is residing with him on that floor.

\* The two lawyers are residing in two houses on two adjacent floors.

\* No lawyer is residing in a house on the floor that the doctor is residing.

\* No two professionals from the same profession are occupying two houses on any of the floors.

\* A professional is residing in each of the houses on the first floor.

According to this information select the correct answer for each question given below and write the **number** of the relevant choice **on the dotted line** given against the question.

71. How many houses are there on the first floor?  
(1) 3                      (2) 4                      (3) 5                      (4) 6                      (.....)

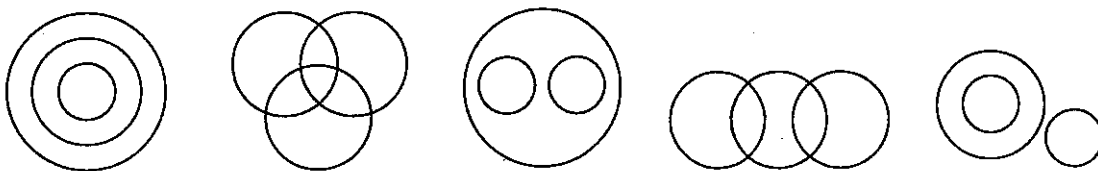
72. How many houses are there on the ground floor where a professional is **not** residing?  
(1) 1                      (2) 2                      (3) 3                      (4) 4                      (.....)

73. Who are the professionals residing on the ground floor?  
(1) lawyer and engineer  
(2) lawyer and accountant  
(3) lawyer, accountant and engineer  
(4) doctor, accountant and engineer                      (.....)

74. Who is the professional **not** residing on the first floor?  
(1) accountant              (2) doctor              (3) engineer              (4) lawyer              (.....)

75. Who are the professionals residing only on two adjacent floors?  
(1) lawyer and accountant  
(2) lawyer and engineer  
(3) lawyer and doctor  
(4) accountant and engineer                      (.....)

● Questions from No. 76 to 80 are based on the five figures which depict the ways in which the sets in a group of three sets could represent the relations between them.



\* Under each question below four groups of three sets are given.

\* Out of them only three groups of three sets are depicted by the three of the given figures.

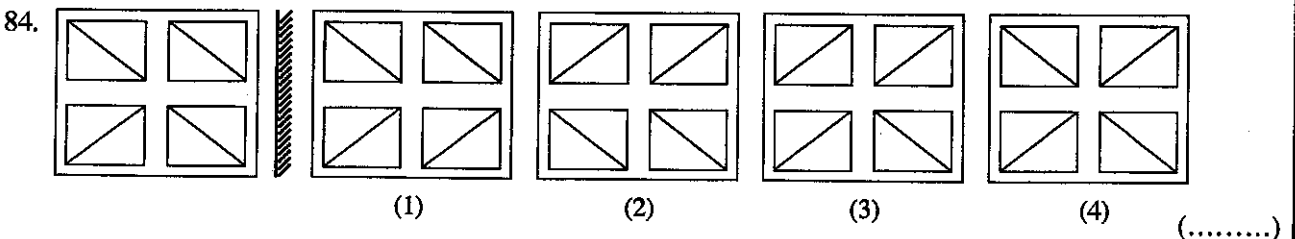
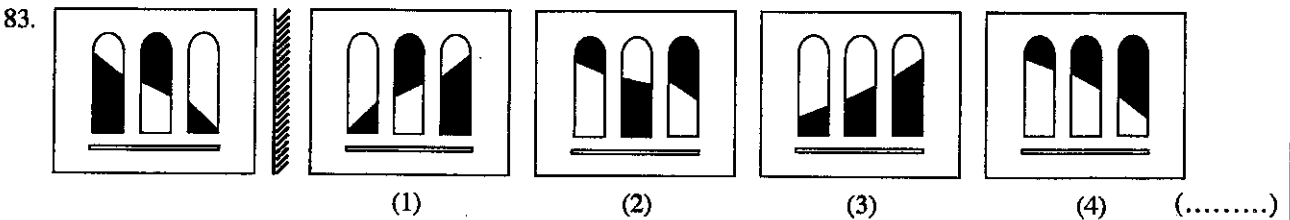
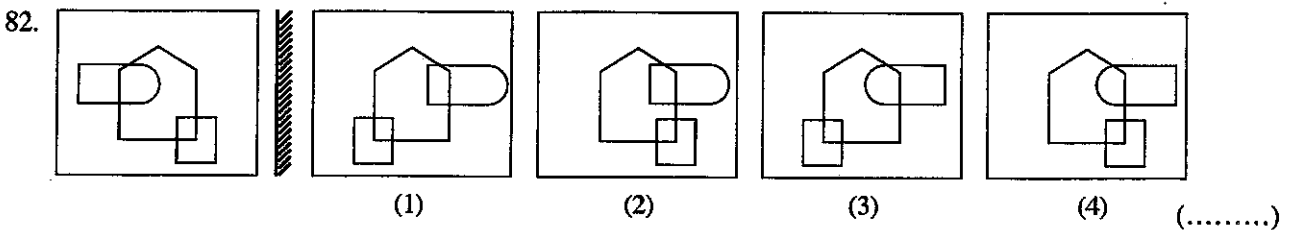
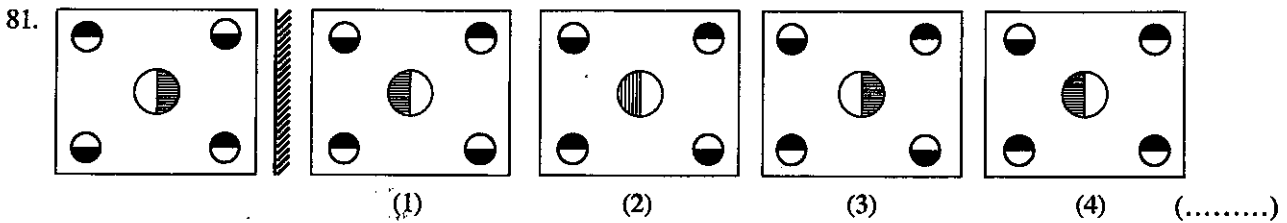
Accordingly select the remaining three sets that **cannot** be depicted by any of the figures and write the **number** of the relevant choice **on the dotted line** given against the question.

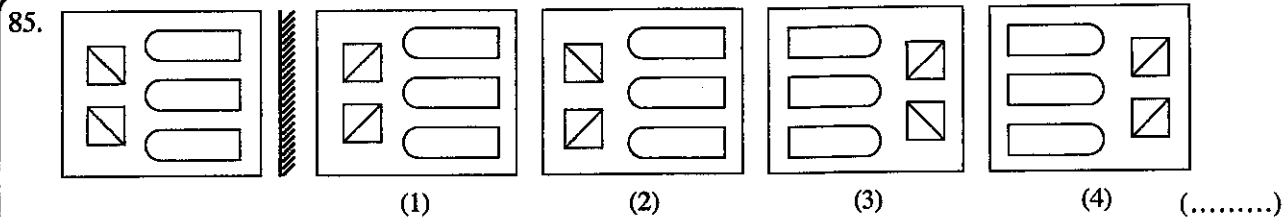
76. (1) chapter, paragraph, sentence  
(2) hospital, male nurse, doctor  
(3) present, past, future  
(4) lawyer, writer, singer                      (.....)



77. (1) year, month, week  
 (2) whole numbers, odd numbers, square numbers  
 (3) cloths, sarees, trousers  
 (4) polygons, triangles, circles (.....)
78. (1) seed, fruit, plant  
 (2) parliament, sergeant-at-arms, speaker  
 (3) high court, court of appeal, supreme court  
 (4) novels, short stories, English medium books (.....)
79. (1) furniture, stationery, agro-equipment  
 (2) herbivores, terrestrial animals, mammals  
 (3) civil law, property law, criminal law  
 (4) quadrilateral, parallelogram, rhombus (.....)
80. (1) ministers, members of parliament, politicians  
 (2) land, forests, deserts  
 (3) judge, district judge, justice of the peace  
 (4) food, food containing carbohydrates, food containing proteins (.....)

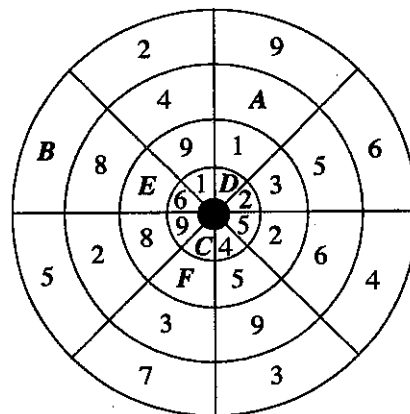
● Questions from No. 81 to 85 show a set of figures in front of a mirror. Select the correct image of the each set of figures as seen in the mirror and write the **number** of the relevant choice on the **dotted line** given against the question





● Questions No. 86 to 90 are based on a network of circles consisting of four circular paths made of eight parts equidistant from the centre in which a set of numbers appear as shown.

- \* In the network of circles in every circular path eight numbers out of the numbers from 1 to 9 are included.
- \* The number that is not included in a circular path should be included in one of the adjacent circular paths.
- \* Also there are eight sectors each sector consisting of four parts.
- \* In each such sector no number is repeated.
- \* On the above conditions each of the places marked with the letters *A*, *B*, *C*, *D*, *E* and *F* also will have a number relevant to it.



According to this information find the correct answer for each question and write that **answer only in numerical form on the dotted line** given against the question.

86. What is the number relevant to the place *A*? (.....)
87. What is the number relevant to the place *B*? (.....)
88. What is the number relevant to the place *C*? (.....)
89. What is the number relevant to the place *D*? (.....)
90. If the number 6 is **not** in the circular path where *F* occurs, what is the number that has to go into the place *E*? (.....)

● Under each question from No. 91 to 95 a certain problem and two statements I and II are given. Out of the two statements write

- \* No. 1 if the problem can be solved using only statement I
- \* No. 2 if the problem can be solved using only statement II
- \* No. 3 if the problem can be solved using both statements I and II
- \* No. 4 if the problem can be solved using statements I and II separately
- \* No. 5 if the problem **cannot** be solved using any of the statements I and II

on the dotted line given against the question.

91. **Problem** : Of the four pupils Tharaka, Malaka, Devaka and Senaka, the weight of the heaviest pupil is 40 kilograms. Accordingly, what is the weight of the lightest pupil of them in kilograms?

**Statement** : I. The sum of the weights of Malaka and Senaka is 20 kilograms more than the weight of Devaka.

II. The sum of the weights of Senaka and Devaka is 20 kilograms more than the weight of Tharaka. (.....)



92. **Problem** : Of the blue, red and green coloured buttons in a container 150 are red. What is the total number of buttons in that container?

**Statement** : I. 50% of the buttons in the container is blue.

II. 350 out of the buttons in the container is green. (.....)

93. **Problem** : Some of the competitors who participated in a marathon completed the race and some did not complete it. What is the total number of competitors who participated in that marathon race?

**Statement** : I. 30 competitors who participated in the marathon did not complete the race.

II. If another 45 competitors finished the race, the number of competitors who completed the race will be increased by 50%. (.....)

94. **Problem** : The total numbers who participated in the general meeting last year was 5600. How many ladies were among them?

**Statement** : I. The number of male participants at the meeting was 2800 more than the number of female participants.

II. The number of male participants of the meeting is three times the number of female participants. (.....)

95. **Problem** : A report of 100 pages can be typed by  $P$  and  $Q$  during eight hours. If  $P$  typed it alone, how many hours will it take?

**Statement** : I. If  $Q$  alone typed the 100 page report it will take 12 hours.

II. If both  $P$  and  $Q$  typed a report of 200 pages, it will take 16 hours. (.....)

● Find the correct answer for each question from No. 96 to 100 and write that answer only in numerical form on the dotted line given against the question.

96. If all the numbers from 1 to 100 are written, how many times will number 3 be written there? (.....)

97. The number of males in a bus that left city  $A$  is twice the number of females in the bus at the time. At the city  $B$  10 males got down from the bus and 5 females got into the bus. Then the number of males and females in the bus were equal. Accordingly, what is the total number of males and females in the bus when it left city  $A$ ? (.....)

98. Chamara can pay only 75% of the amount he had to pay with the money he had at the time. If he has 8 rupees more, he could have paid 80% of the amount he had to pay. Accordingly what is the amount that Chamara had in rupees? (.....)

99. 590 rupees has to be spent to buy 3 mangoes, 5 guavas and 4 woodapples. 310 rupees has to be spent to buy 3 mangoes, 1 guava and 2 woodapples. Accordingly, how much in rupees has to be spent to buy 2 mangoes, 2 guavas and 2 woodapples? (.....)

100. A driver knows four ways to go from city  $A$  to city  $B$ . Likewise he knows three ways to go from city  $B$  to city  $C$ . Further he knows that two ways to go from city  $C$  to city  $D$ . Accordingly, how many different ways that the driver knows to go from city  $A$  to city  $D$ ? (.....)

\* \* \*

