

සියලු ම හිමිකම් ඇවිරිණි]
 முழுப் பதிப்புரிமையுடையது]
 All Rights Reserved]

ශ්‍රී ලංකා විභාග දෙපාර්තමේන්තුව / இலங்கைப் பரீட்சைத் திணைக்களம் / Department of Examinations, Sri Lanka

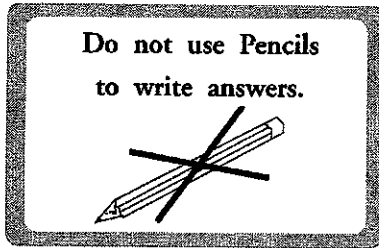
Sri Lanka Law College Entrance Examination – 2020 (June 2019)

(01) Language Skills

Three hours

Instructions to candidates

Very Important



* When answering write down the digits as mentioned below.

0 1 2 3 4 5 6 7 8 9

Write your Index Number here and on
pages 3 and 5 in the spaces indicated.

.....

Checked as correct

.....

Invigilator's Initials

Important :

- * This paper consists of 38 questions on 10 pages.
- * Answer all questions on this paper itself.
- * Commence answering only after the Centre Supervisor's announcement.
- * Instructions given should be strictly followed in answering this paper and marks will not be awarded for answers not in accordance with these instructions.
- * Even if you are not attempting the paper hand it over to the Supervisor.
- * Write the answers clearly and legibly in blue or black ink only and not in pencil.
- * It is an offence to remove this paper from the examination hall or turn out photocopies of the same.
- * Answer scripts with illegible figures, illegible handwriting, those where erasing fluid has been used and written in pencil will not be marked /evaluated.

For Examiner's use only

Page No.	Question Nos.	Marks awarded
2	1-11	
3	12-29	
4	30-32	
	33-35	
4-6	36	
7-8	37	
9-10	38	

Final Score

In figures	
In words	
Answer Script Marked By	
Checked by	
Chief Examiner	

● In each of the questions from No. 1 to 3, select the **incorrectly** spelt word and write the **number** of the relevant choice **on the dotted line** provided against each question. (03 marks)

1. (1) practitioner (2) precausion (.....)
(3) predominant (4) preconception
2. (1) referendum (2) superintendent (.....)
(3) survellance (4) irrespective
3. (1) recruitment (2) magnifisent (.....)
(3) psychological (4) sympathetic

● In each of the questions from No. 4 to 6, rearrange the words in the alphabetical order; check with the answers given and write the appropriate **number** of the relevant choice **on the dotted line** provided against each question. (03 marks)

4. (A) reckless (B) recollect (C) recent (D) recognition
(1) C, A, B, D (2) B, A, D, C (3) C, A, D, B (4) A, C, B, D (.....)
5. (A) scurry (B) screen (C) sculpture (D) scrutiny
(1) A, B, C, D (2) B, D, C, A (3) C, D, B, A (4) D, B, A, C (.....)
6. (A) morality (B) morgue (C) morbid (D) morning
(1) B, A, D, C (2) A, C, B, D (3) A, D, C, B (4) B, D, A, C (.....)

● In each of the questions from No. 7 to 11, select the **most appropriate preposition** to fill in the blank and write the **number** of the relevant choice **on the dotted line** provided against each question. (05 marks)

7. William Shakespeare's *The Merchant of Venice* has been translated many languages.
(1) to (2) into (3) on (4) onto (.....)
8. There was a serious car accident at Wijerama Junction this morning. Reportedly, a car has collided a lorry.
(1) on (2) to (3) at (4) with (.....)
9. Mr. Ravi Gamage is an experienced lawyer in Sri Lanka. He has specialized criminal law.
(1) in (2) on (3) with (4) at (.....)
10. Finally, justice depends partly the calibre of people working in the legal system. Better legal education is vital to this.
(1) in (2) on (3) at (4) with (.....)
11. The crowd that attended the rally consisted mainly university students.
(1) of (2) with (3) from (4) on (.....)



- In each of the questions from No. 12 to 15, **underline** the correct option to fill in the blank. (04 marks)

12. Most people enjoy reading (historic / historical) novels. Such a novel generally has a plot set in the history.
13. In many countries, steps have been taken to (advice / advise) judges to avoid social media as much as possible.
14. As revealed in the court yesterday, the victim had been threatened by the accused to keep (quite / quiet) about the assault.
15. According to some recent measures taken by New Zealand Human Rights Commission, people (affected / effected) by domestic violence receive more legal protection.

- In questions from No. 16 to 21, fill in each blank with a suitable form of the verb provided within brackets. (06 marks)

Ravi is a legal officer at a private bank in Colombo, and he often (16) (go) abroad on business trips. Last week, he had to go to Tokyo, but he almost (17) (miss) his flight. He (18) (stand) in the queue at the check-in desk when he suddenly (19) (realize) that he (20) (leave) his passport at home. Fortunately, Ravi lives near the airport, so he (21) (have) time to take a taxi home to get it. He got to the airport just in time for the flight.

- In each of the questions from No. 22 to 29, **underline** the **most appropriate** word to fill in each blank from the options given within brackets. (08 marks)

People act a little strangely when a television camera comes their way. Some people behave (22) (because, unless, as if, also) a crazy puppeteer were pulling (23) (theirs, his, its, their) strings. Their arms jerk (24) (wildly, wild, wilder, wilderness) about, and they begin (25) (jump, jumping, jumped, jumps) up and down for no apparent (26) (result, respect, reason, motivation). Often they accompany their body movements (27) (at, in, for, with) loud screams, squeals and yelps. Another group of people engage in an activity (28) (know, knew, known, knows) as the cover-up. They will be calmly (29) (watch, watching, watched, watches) a sports game or other event when they realize the camera is focused on them.

- For each of the questions from No. 30 to 32, if the given sentence is incorrect, correct it and write the complete sentence on the dotted line provided. If the given sentence is correct, just write the word "correct" (05 marks)

30. Mr. Gamage has been working as a lawyer since 1998.

.....

31. If Prakash had studied hard, he will have passed the exam.

.....

.....

32. Lot of people don't realize the real value of time until they run short of it.

.....

.....

- For the questions from No. 33 to 35, explain the meaning of each phrase in your own words and construct a sentence to bring out its meaning effectively. (06 marks)

33. see eye to eye :

Meaning :

Sentence :

.....

34. hit the nail on the head :

Meaning :

Sentence :

.....

35. tip of the iceberg :

Meaning :

Sentence :

.....

36. Read the following text and write short answers for the questions given below.

The best known of the technological achievements of the ancient Sinhalese are their irrigation tanks and channels. The technique of building a dam across a valley during the dry season so that storm water during the wet season would accumulate in an artificial lake was a simple operation and had been used both in India and other Asian countries. But what the ancient Sinhalese engineers executed were not projects of such a nature. Theirs were massive schemes involving an expert knowledge of the major principles of hydraulics. They built dams across perennial rivers with gigantic rock slabs, cut into shape and fitted right to render the dams leak-proof. The dams at Elahera (constructed in the first century A.C. by Vasabha and enlarged

in the third century A.C. by Mahasen) and Minipe (constructed by Aggabodhi I in the sixth century) are among the most impressive irrigation dams of the ancient Sinhalas.

Vasabha, who was most probably the first king to undertake large-scale irrigation schemes, built as many as eleven tanks (of which six are identifiable) and twelve channels including the famous Elahera, Yodha Ela. Mahasen (275-301 A.C.), whose services to the people in this direction led to his apotheosis as 'the god of Minneriya', constructed sixteen tanks among which Minneriya and Kavuduluvava extended in area to over 4500 acres each.

With experience and increased knowledge, the ancient Sinhalas undertook more ambitious projects. Kalavava of Dhatusena (455-479 A.C.) covered an area of 6380 acres and its bund was nearly four miles long. It was in the reign of Dhatusena that Jayaganga was constructed to bring water from Kalavava to Tisavava in Anuradhapura; it was a man-made river, uniformly forty feet in width and fifty-four miles long. In tracing this channel the anonymous engineers of the fifth century Ceylon performed an incredible feat. For the first seventeen miles, the gradient of the channel was a steady six inches in every mile. This fact speaks volumes on the depth of technical know-how and the methods of surveying, levelling and tracing which the ancient Sinhalas possessed. Unfortunately, we do not know what they were. We have no data on the instruments they used. We can only conjecture that the accuracy these ancient works display was never possible without some precise instruments even if they were only primitive contrivances.

One's admiration for these unknown technologists of the past increases with every report that the modern engineer with his expensive precision equipment could often do no better than retrace the ancient plans. Even more interesting are instances when the modern engineer had tried to find fault with their by-gone counterparts. A Dutch engineer declared the Giant's Tank to be faulty; but after seventy-five years an English surveyor found that the instrument-equipped Dutch engineer was wrong and the original design was workable (as it has now been proved). Man made rivers criss-crossed the dry zone feeding tanks at different levels and supplying water to a vast area of rice-fields. At the end of the tenth century, such channels totalled over five hundred miles. It is not surprising, therefore, that the fame of Ceylon's irrigation schemes spread to other lands. Rajatarangini, the Chronicle of Kashmir, mentions how king Jayapida in 745 A.C. obtained the technical assistance of Sinhala engineers and workmen to build tanks and channels in his kingdom.

(i) Based on the above text, state whether the following statements are **true** or **false** by writing '✓' or '✗' in the box given. If **false**, write the correct answer in the space provided. (13 marks)

(a) *Elehara Dam* was built by *King Mahasen* while it was expanded by *King Vasabha*.

.....
.....

(b) Five of the tanks built by *King Vasabha* have not been identified.

.....
.....

(c) The name of the king who built *Elehara* and *Yoda Ela* is unknown.

.....
.....

(d) The outstanding feature of Jayaganga is its width and length.

.....
.....

(e) Out of the tanks mentioned in the passage, the largest is *Kalavava*.

.....
.....

(ii) Write **short** answers for the following questions.

(07 marks)

(a) What is the main idea that the author of this passage attempts to convey?

.....
.....

(b) Why does the writer consider the construction of a dam across a valley to accumulate rain water in an artificial lake as a simple operation?

.....
.....

(c) What does the passage reveal about the instruments ancient Sinhala have used for irrigation projects?

.....
.....

(d) What evidence does the passage provide to suggest that ancient Sinhala engineers had provided technical assistance to build irrigation projects in other countries too?

.....
.....

(e) What impression does the author create of ancient irrigation engineering when s/he says: "One's admiration for these unknown technologies of the past increases with every report that the modern engineer with his expensive precision – equipment could often do no better than retrace the ancient plans."

.....
.....

(f) Number the following events according to the order in which they occurred.

(.....) King Datusena built Kalawewa.

(.....) King Aggabodhi I built Minipe.

(.....) King Mahasen constructed sixteen tanks.

(.....) King Vasabha built eleven tanks and twelve channels.

37. Read the following text and summarize it into **one third of its length** and give a **suitable title**.
Indicate the **number of words** used at the end. (15 marks)

Colebrooke's motivation with regard to education can only be judged from what he has written in his report. What he has not written is probably more significant than what he has written. From the time North took over the Governorship of the Island up to the time of Colebrooke's report, three motives may be discerned in educational activity namely, religious, humanitarian and utilitarian.

It is difficult to trace any religious motives behind the recommendations of Colebrooke. For one thing, he ignored completely the subject of religion and the relation between the State and the Church of England. There is nothing in the report commending the task of conversion and the spread of Christianity though he did commend the educational work of the missionaries. He did not advocate any grants or facilities for missionary work, though his recommendations served to leave a free-hand to the missionaries to expand their missionary activities through education. Colebrooke's main concern seems to have been to make use of the missionaries for his purpose which was to provide education without much cost to the Government.

It might be contended that humanitarianism was the key-note of his educational reforms, since liberal ideas influenced so many of the recommendations he put forward for the reforms of the administration. Though there are a few references that bear out the belief he had that education will enable the people to shed their "absurd prejudices" and benefiting from "a liberal education", "cultivate European attainment", and take their place alongside the Europeans in the administration of the country, yet a perusal of the report and a careful examination of the recommendations will show that the main interest he had in education was utilitarian and that too from the narrow point of view of the public service.

It is significant that his reflections and recommendations on education follow logically from the recommendations that he makes on "the civil establishment" and "the employment of natives". These two sections of the report throw a flood of light not only on his attitude to education but also on the purpose that lies behind his recommendations and the objects he hoped to achieve. He points out that the Civil Service at this time which was recruited entirely from Britain consisted of thirty-eight members but that there were twenty-five senior appointments reserved entirely for them. "The means of selection therefore", he argues, "are much too limited", and the Government had been forced to employ military personnel in civil appointments in the Kandyan areas. A few "descendants of European settlers" (Burghers) who had profited by education and had been employed in Government Service and "have been extremely useful" and proved their worth. He makes a very strong plea that the public service should be freely open to all classes of persons according to qualifications; the exclusive principle of the civil service should be relaxed and the means of education held out to the natives whereby they may in time qualify themselves for holding some of the higher appointments.

Title :

.....
.....
.....
.....

A large rectangular area with a solid border, containing 25 horizontal dotted lines for writing.



සියලුම හිමිකම් ඇවිරිණි]
 முழுப் பதிப்புரிமையடையது]
 All Rights Reserved]

ශ්‍රී ලංකා විභාග දෙපාර්තමේන්තුව / இலங்கைப் பரீட்சைத் திணைக்களம் / Department of Examinations, Sri Lanka

Sri Lanka Law College Entrance Examination – 2020 (June 2019)


(02) General Knowledge and Intelligence

(Two hours)

Part I – General Knowledge

Instructions to candidates

Very Important :



* When answering write down the digits as mentioned below.

0 1 2 3 4 5 6 7 8 9

Write your Index Number here and on
pages 3 in the space indicated.

.....

Checked as correct

.....

Invigilator's Initials

Important :

- * Subject No.(02) General Knowledge and Intelligence paper consists of two parts as Part I–General Knowledge and Part II – Intelligence.
- * The time allowed for both parts is two hours.
- * Part I–General Knowledge paper consists of 50 questions on 05 pages.
- * Answer all the questions on this paper itself.
- * Commence answering only after the Centre Supervisor's announcement.
- * Instructions given should be strictly followed in answering this paper and marks will not be awarded for answers not in accordance with these instructions.
- * Even if you are not attempting the paper hand it over to the Supervisor.
- * Write the answers clearly and legibly in blue or black ink only and not in pencil.
- * It is an offence to remove this paper from the examination hall or turn out photocopies of the same.
- * Answer scripts with illegible figures, illegible handwriting and those where erasing fluid has been used will not be marked / evaluated.

For Examiner's use only

Page No.	Question Nos.	Marks Awarded
2	1 – 12	
3	13 – 25	
4	26 – 40	
5	41 – 50	
Total		

Final Score

In figures	
In words	

Answer Script Marked By	
Checked By	
Chief Examiner	

- For each of the question No. 1 to 30, select the **correct** or the **most appropriate** or the **closest answer** and write the **number** of the relevant choice **on the dotted line** provided.
1. According to the Socio Economic Data – 2018, of the Central Bank of Sri Lanka what is the population density of Sri Lanka per square kilometre?
(1) 315 (2) 324 (3) 332 (4) 342 (.....)
 2. What was the year in which Sri Lanka enacted the Extradition Law for the first time?
(1) 1972 (2) 1974 (3) 1977 (4) 1978 (.....)
 3. According to the 2019 Annual Budget of Sri Lanka how many new Samurdhi beneficiaries are expected to be enrolled?
(1) 400000 (2) 450000 (3) 500000 (4) 600000 (.....)
 4. What is the main reason among the choices given below, for the long life expectancy of the Sri Lankans?
(1) High Literacy rate (2) State Welfarism
(3) Hygienic Facilities (4) Good Dietary habits (.....)
 5. Which one of the following is **not** a Department comes under the Ministry of Justice and Prison Reforms?
(1) Government Analyst's Department (2) Criminal Investigation Department
(3) Department of Public Trustee (4) Legal Draftsman's Department (.....)
 6. In formulating the 1978 Constitution of Sri Lanka, Executive Presidential system included in it has been mainly influenced by the
(1) French Presidential System. (2) American Presidential System.
(3) Russian Presidential System. (4) Indian Presidential System. (.....)
 7. The first Sri Lankan to be appointed as the Chief Justice in Sri Lanka was
(1) Sir Edward Jayatilake. (2) Mr. Arthur Wijewardena.
(3) Mr. Hema Basnayake. (4) Mr. M. Sansoni (.....)
 8. Which one of the following is **not** within the jurisdiction of a Magistrate Court?
(1) Post-mortem Examinations
(2) Issue of search warrants
(3) Power to issue writ
(4) Ordering persons to enter into bonds of good character (.....)
 9. What is the number of subjects in the thirteen year Guaranteed Education Programme introduced for school children after the General Certificate of Education (Ordinary Level) Examination?
(1) 25 (2) 26 (3) 27 (4) 28 (.....)
 10. According to the Department of Census and Statistics, overall Computer Literacy rate in Sri Lanka in the first six months of 2018 was
(1) 27%. (2) 27.5%. (3) 29%. (4) 30.5%. (.....)
 11. Who was the great Sri Lankan Tamil Leader who worked towards national unity in Sri Lanka?
(1) Sir Ponnambalam Ramanathan (2) Mr. Ponnambalam Arunachalam
(3) Sir Arunachalam Mahadeva (4) Mr. G.G. Ponnambalam (.....)
 12. Which one of the following is a **mismatch**?
(1) Sir D.B. Jayatilake – Politics (2) Father Peter Pillai – Education
(3) Mr. Jeffrey Bawa – Architecture (4) Mr. E.W. Perera – History (.....)



13. The longest railway fly-over bridge in Sri Lanka has been built between
 (1) Nanu oya and Badulla (2) Matara and Beliatta
 (3) Anuradhapura and Jaffna (4) Galoya junction and Batticaloa (.....)
14. How many Administrative Districts are there in Sri Lanka?
 (1) 22 (2) 23 (3) 24 (4) 25 (.....)
15. The year in which tobacco cultivation will be banned in Sri Lanka is
 (1) 2020. (2) 2021. (3) 2022. (4) 2023. (.....)
16. According to the Global Peace Index the most peaceful country in 2018 was
 (1) Denmark. (2) Iceland. (3) Japan. (4) Canada. (.....)
17. Which one of the following is the name of the Japanese Parliament?
 (1) Diet (2) Duet (3) Duma (4) Majlis (.....)
18. Which country in Asia is called the 'Graveyard of Empires'?
 (1) India (2) China (3) Afghanistan (4) Pakistan (.....)
19. The most harmful effect of Globalization is the
 (1) fading away of smaller cultures.
 (2) people getting used to conspicuous consumption.
 (3) job insecurity of people.
 (4) increased competition among people. (.....)
20. Which one of the following is **not** a Soft Skill?
 (1) Communication (2) Critical thinking (3) Work ethics (4) Data analysis (.....)
21. Which one of the following is only an opinion?
 (1) Most innovations in the world were created by the Chinese until the Middle Ages.
 (2) Most scientific research commenced after the Industrial Revolution.
 (3) Most Developing countries do not adhere to the rule of law.
 (4) Most countries with STEM subjects (Science, Technology, Engineering, Mathematics) have leapfrogged in development. (.....)
22. The country which is **not** a permanent member of the UN Security Council is
 (1) United Kingdom. (2) United States of America.
 (3) France. (4) Germany. (.....)
23. Who made the statement that "Injustice anywhere is a threat to justice everywhere"?
 (1) Martin Luther King (2) Nelson Mandela
 (3) His Holiness Pope Francis (4) Theodore Roosevelt (.....)
24. The European city known for its 'high culture' is
 (1) Paris. (2) London. (3) Brussels. (4) Geneva. (.....)
25. The Big Bang theory explains the
 (1) origin of the Universe. (2) origin of the Planets.
 (3) origin of the Sun. (4) origin of Galaxies. (.....)

26. The first Truth Commission to investigate the violation of Human Rights was established in 1983 in
(1) Argentina. (2) South Africa. (3) Sri Lanka. (4) Ukraine. (.....)
27. What is the name of the country which is responsible for highest emission of carbon dioxide in the world?
(1) United States of America (2) China
(3) Russia (4) India (.....)
28. Who introduced the 'laissez faire' theory in economics?
(1) Adam Smith (2) Alfred Marshall (3) J.S. Mill (4) Robert Malthus (.....)
29. The Asian Games in 2022 will be held in
(1) Japan. (2) India. (3) South Korea. (4) China. (.....)
30. What is the name of the European country which has urged Jews not to wear skullcap in public places by the government?
(1) France (2) Germany (3) Italy (4) United Kingdom (.....)

● For each question from No. 31 to 50 write the correct answer in brief, on the dotted line provided.

31. With the advice and consent of which institution the President of Sri Lanka appoints a Judge of Supreme Court?
.....
32. What was the year in which Sri Lanka came to be known as the 'Democratic Socialist Republic of Sri Lanka'?
.....
33. By provisions of which Act Parliament of Sri Lanka, the Labour Tribunals were established?
.....
34. What is the name of the main State institution which recommends legal reforms in Sri Lanka?
.....
35. What is the highest plateau in Sri Lanka?
.....
36. What is the name of the largest Island belonging to Sri Lanka?
.....
37. Above what age is a Last Will can be executed by a person of sound mind?
.....
38. What is the principal judicial institution of the United Nations Organization (UNO)?
.....
39. What is the type of the Writ requiring a person under arrest or custody to be brought before a Court?
.....
40. What is considered to be the most remarkable technological creation in ancient Tank building of this country?
.....



41. What is the country in which a dead language is being used as its official language since 1949?

.....

42. What is the country reckoned as 'The World Factory'?

.....

43. What is the name of the most ancient Code of Ethics for Western Doctors?

.....

44. What is the name of the institution monitoring the International Trade?

.....

45. What is the country in which the Cannes Film Festival being held annually?

.....

46. State **one** of the components of the UN Human Development Index.

.....

47. Who was the first Olympic medal winner of Sri Lanka?

.....

48. Who is regarded as the 'Father of International Law'?

.....

49. Who is the creator of the Wikileaks web?

.....

50. What is the name of the Asian country which has a policy of 'Military first'?

.....

* * *



සියලුම හිමිකම් ඇවිරිණි]
முழுப் பதிப்புரிமையடையது]
All Rights Reserved]

ශ්‍රී ලංකා විභාග දෙපාර්තමේන්තුව / இலங்கைப் பரீட்சைத் திணைக்களம் / Department of Examinations, Sri Lanka

Sri Lanka Law College Entrance Examination – 2020 (June 2019)

(02) General Knowledge and Intelligence

Two hours

Part II – Intelligence

Instructions to candidates

Very Important :

Do not use Pencil
to write answers.



* When answering write down the digits as mentioned below.

0 1 2 3 4 5 6 7 8 9

Write your Index Number here and on
pages 3 and 5 in the space indicated.

.....

Checked as correct

.....

Invigilator's Initials

Important :

- * Subject No.(02) General Knowledge and Intelligence paper consists of two parts as Part I–General Knowledge and Part II – Intelligence.
- * The time allowed for both parts is two hours.
- * Part II–Intelligence paper consists of 50 questions on II pages.
- * Answer all the questions on this paper itself.
- * Commence answering only after the Centre Supervisor's announcement.
- * Handover the answer script I and II separately.
- * Calculators are not allowed.
- * Instructions given should be strictly followed in answering this paper and marks will not be awarded for answers not in accordance with these instructions.
- * Even if you are not attempting the paper hand it over to the Supervisor.
- * Write the answers clearly and legibly in blue or black ink only and not in pencil.
- * It is an offence to remove this paper from the examination hall or turn out photocopies of the same.
- * Answer scripts with illegible figures, illegible handwriting, those where erasing fluid has been used and written in pencil will not be marked / evaluated.

For Examiner's use only

Page No.	Question Nos.	Marks Awarded
2	1 – 6	
3	7 – 11	
4	12 – 20	
5	21 – 25	
6	26 – 30	
7	31 – 35	
8	36 – 40	
9	41 – 45	
10	46 – 48	
11	49 – 50	
Total		

Final Score

In figures	
In words	
Answer Script Marked By	
Checked By	
Chief Examiner	

● In the questions from No. 1 to 5 three words having a certain relationship are given at the first. Select the three words having the closest relationship to the given three words and write the **number** of the relevant choice **on the dotted line** given against the question.

1. wall : picture : clock
 (1) pen : pencil : blackboard (2) fence : ladder : parapet
 (3) table : vase : lamp (4) bus : car : bicycle (.....)
2. smile : laughter : crying
 (1) touch : hold : release (2) dawn : noon : evening
 (3) pinch : squeeze : touch (4) bend : break : paste (.....)
3. chair : bed : rest
 (1) canal : rivulet : water (2) river : sea : swim
 (3) whip : goad : noose (4) instant : moment : interval (.....)
4. large : huge : enormous
 (1) mind : brain : knowledge (2) head : apex : body
 (3) lake : sea : ocean (4) examine : search : observe (.....)
5. front : near : far
 (1) calm : nervous : commotion (2) start : middle : end
 (3) breeze : storm : wind (4) accusation : investigation : punishment (.....)

● Questions from No. 6 to 10 are based on the number grid given below.

❖ Here, boxes in every row and column should be filled with digits 1 to 6.

* No digit should be repeated in any of the rows or columns.

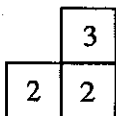
* Five areas in the grid named as (A), (B), (C), (D) and (E) are kept blank.

* Fill the boxes and answer the questions given below.

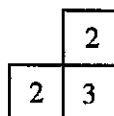
4	(A)	6	1	(B)
(C)	(D)	5	(E)	6
1	4	2	(F)	6
5	1	3	6	2
(G)	(H)	1	2	(I)
2	(J)	4	3	1

Write the **number** of the correct choice **on the dotted line** in front of the question.

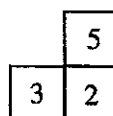
6. Which of the following figures can fill the area marked as (A)?



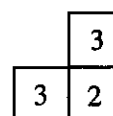
(1)



(2)



(3)



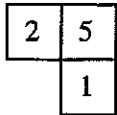
(4)

(.....)

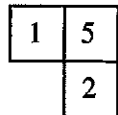
For rough work



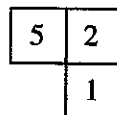
7. Which of the following figures can fill the area marked as (B)?



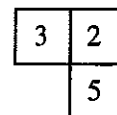
(1)



(2)



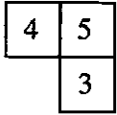
(3)



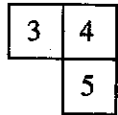
(4)

(.....)

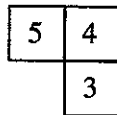
8. Which of the following figures can fill the area marked as (C)?



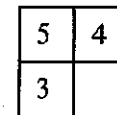
(1)



(2)



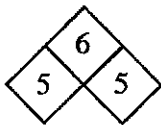
(3)



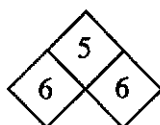
(4)

(.....)

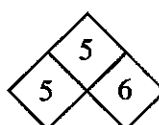
9. Which of the following figures can fill the area marked as (D)?



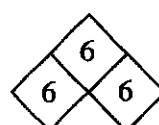
(1)



(2)



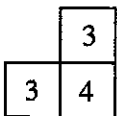
(3)



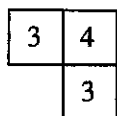
(4)

(.....)

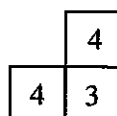
10. Which of the following figures can fill the area marked as (E)?



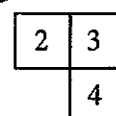
(1)



(2)



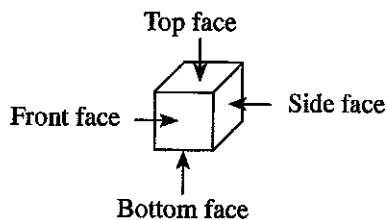
(3)



(4)

(.....)

• Questions from No. 11 to 15 are based on the following information.



* Shown above are four positions of the cube whose faces are marked with A, B, C, D, E, F. Accordingly, choose the correct answer from the choices given below for each question and write the **number** of the relevant choice on the **dotted line** given against the question.

11. Which one of the following pairs of letters are written on **two** opposite faces of the cube?

(1) A, D

(2) A, E

(3) A, F

(4) B, D

(.....)

For rough work



12. Which of the following pairs of letters appear on **two** opposite faces of the cube?
(1) *B, D* (2) *B, E* (3) *B, F* (4) *D, E* (.....)
13. Which of the following **three** letters that can be seen on the front face, on the top face and on a side face of the cube at a certain instance?
(1) *B, C, D* (2) *B, C, E* (3) *B, C, F* (4) *C, D, E* (.....)
14. In a certain instance the letters *A* and *B* appear on the front face and on a side face. In this instance one of the two letters appear on the top face is
(1) *C* or *D*. (2) *C* or *E*. (3) *C* or *F*. (4) *D* or *E*. (.....)
15. In one instance the letters *E* and *F* are seen on the front face and on a side face. In this instance one of the two letters that can be seen on the bottom face is
(1) *A* or *B*. (2) *A* or *C*. (3) *B* or *C*. (4) *C* or *D*. (.....)

- Questions from No. 16 to 20 are based on the information on kinship of few families given by complainants to a lawyer to solve a problem.

Accordingly, select the correct answer for each question and write the **number** of the relevant choice **on the dotted line** given against each question.

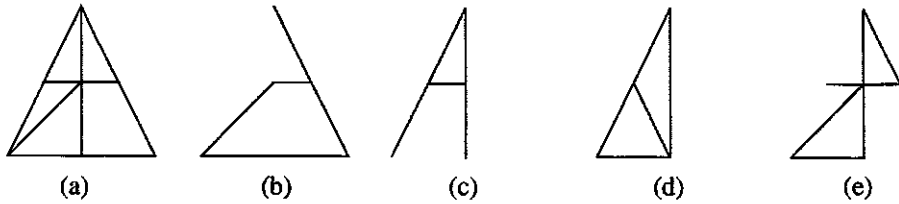
16. The complainant 'Sumith' showing Susila to the lawyer says
"Her husband is my brother-in-law, Sir". Accordingly, who is Sumith of Susila?
(1) Brother (2) Uncle (3) Father (4) Son-in-law (.....)
17. Meanwhile Sumith showing Vimala, a witness, says
"Sir, this lady's mother is my mother's only daughter." Accordingly, who is Sumith of Vimala?
(1) Uncle (2) Son-in-law (3) Brother-in-law (4) Husband (.....)
18. Sirini who appeared as a witness, showing Sumith says to the lawyer
"His only son is my son's father. Sir". Accordingly, who is Sumith of Sirini?
(1) Brother-in-law (2) Husband's father (3) Brother (4) Father (.....)
19. Meanwhile Ajith revealing Sirini's relationship says
"Her father's mother's daughter is married to my father's only son." Accordingly, who is Sirini of Ajith?
(1) Sister (2) Daughter (3) Sister-in-law (4) Daughter-in-law (.....)
20. Pramith, friend of Sumith, introducing Saumya to the lawyer says
"This is my father-in-law's only daughter's husband's brother's wife". Accordingly, who is Saumya of Pramith?
(1) Aunt (2) Daughter-in-Law (3) Sister-in-law (4) Daughter (.....)

For rough work



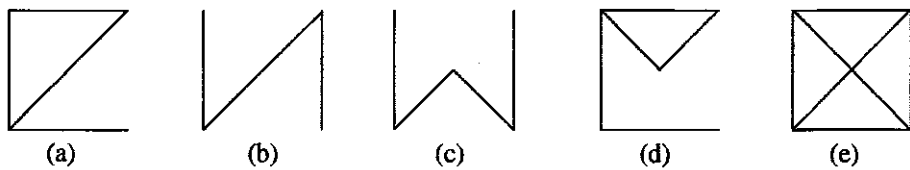
● In the questions from No. 21 to 23, five figures are given. When two of the figures are combined a third figure can be made. (Some lines may overlap) Select the choice that depicts the remaining two figures and write the **number** of the relevant choice on the **dotted line** given against the question.

21.



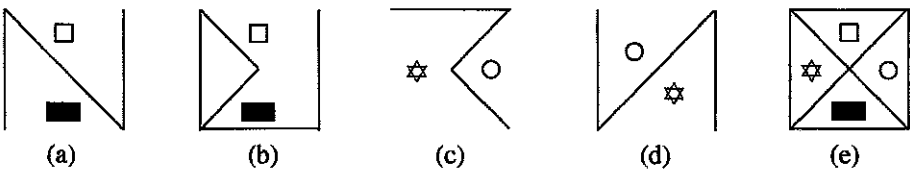
- (1) *a* and *b* (2) *b* and *c* (3) *b* and *e* (4) *d* and *e* (.....)

22.



- (1) *a* and *b* (2) *b* and *c* (3) *b* and *e* (4) *d* and *e* (.....)

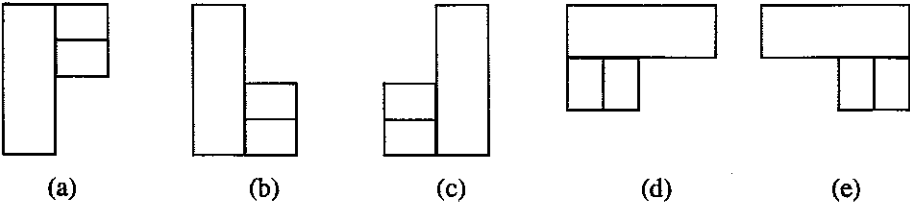
23.



- (1) *a* and *d* (2) *b* and *c* (3) *a* and *e* (4) *b* and *e* (.....)

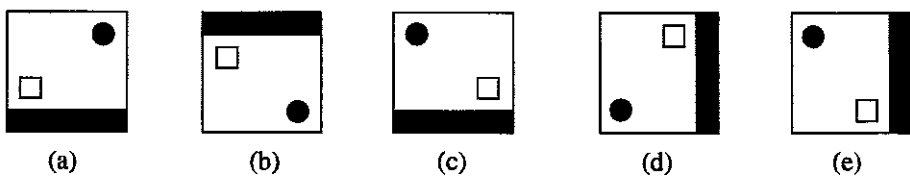
● In the questions No. 24 and 25, five figures are given in each. In **three** of the figures, there is a common relationship and it does not exist in two figures. Select the choice that shows the **two** figures that **does not** have the relationship and write the **number** of the relevant choice on the **dotted line** given against the question.

24.



- (1) *a* and *b* (2) *b* and *c* (3) *b* and *e* (4) *b* and *d* (.....)

25.



- (1) *a* and *b* (2) *a* and *e* (3) *b* and *e* (4) *d* and *e* (.....)

For rough work



- Questions from No. 26 to 30, are based on a secret code used for marking prices in a certain shop.
 - * An English letter is used for each digit mentioned in the price.
 - * Accordingly, six numbers written using those digits and six sets of equivalent English letters are given below.
 - * But the set of letters in front of each number is not the equivalent set of the letters. They are mixed at random.

Number	Secret Code (mixed at random)
328015	<i>FJAGDE</i>
475690	<i>KKACJG</i>
240879	<i>CBFJLE</i>
563210	<i>DCLAFG</i>
149352	<i>AGKEDF</i>
883462	<i>GCEKBL</i>

Accordingly, select the correct answer for each question and write the **number** of the relevant choice on the dotted line given against the question.

26. What is the digit depicted by letter *K*?
(1) 1 (2) 3 (3) 5 (4) 8 (.....)
27. What is the secret letter used for digit 2?
(1) *A* (2) *G* (3) *F* (4) *L* (.....)
28. What is the secret set of letters used for Rs. 2460 in that order?
(1) *AJKF* (2) *BDEL* (3) *GCJE* (4) *GCBL* (.....)
29. What is the correct order of the secret letters that should be used for 563210?
(1) *FJAGDE* (2) *FJAEDG* (3) *EDFGAJ* (4) *BCDEFA* (.....)
30. What is the answer depicting the digits and letters used for the blanks in the following number and the secret word in order?
- 46 - - 9 → A - J K - L
(1) 3, 7, 0, *D, F* (2) 3, 8, 0, *C, E* (3) 3, 5, 6, *C, E* (4) 4, 6, 0, *A, D* (.....)

For rough work



● Questions from No. 31 to 35, are based on nine defendants who stand in a row in a dock.

- * At the two ends of the row are two women.
- * There is a man at the middle.
- * No two women stood adjacent to each other.
- * There are not more than two men between two women.

Accordingly, select the correct answer for each question and write the **number** of the relevant choice on the dotted line given against the question.

31. How many men and women are there among the defendants in that order?
(1) 5 , 4 (2) 3 , 6 (3) 6 , 3 (4) 4 , 5 (.....)
32. How many occasions are there where two men are standing on either side of a woman?
(1) 1 (2) 2 (3) 3 (4) 4 (.....)
33. How many occasions are there where a man and a woman are standing on either side of a man?
(1) 1 (2) 2 (3) 3 (4) 4 (.....)
34. According to the order of standing of the defendants, how many possible ways are there for two adjacent defendants to swap their positions without breaking the above conditions?
(1) 1 (2) 2 (3) 3 (4) 4 (.....)
35. One defendant was acquitted during the hearing of the case. What is the probability as a fraction for that person to be a woman?
(1) $\frac{1}{9}$ (2) $\frac{2}{9}$ (3) $\frac{3}{9}$ (4) $\frac{4}{9}$ (.....)

For rough work



● Questions from No. 36 to 40, are based on the information on parking vehicles.

✦ There are 8 cubicles in the vehicle park. They are in two rows as A, B, C, D and E, F, G, H as shown in the figure below.



- * Seven drivers P, Q, R, S, T, U, V come here to park their vehicles.
- * In the park, cubicle G is inoperative.
- * Q does not like to park in the cubicle H.
- * Driver S parks in the cubicle in front of T.
- * Drivers V and U do not like to park in the same row horizontally next to each other.
- * V always parks the vehicle at one end.
- * Q parks his vehicle in the cubicle in front of U.
- * R parks his vehicle in the cubicle between the cubicles where P and Q park their vehicles.

Accordingly, select the correct answer for each question and write the **number** of the relevant choice on the dotted line given against the question.

36. In which cubicle does Q park his vehicle?
(1) B (2) E (3) F (4) H (.....)
37. Where does T park his vehicle?
(1) B (2) E (3) F (4) H (.....)
38. Who parks his vehicle between the vehicles of the drivers R and S?
(1) T (2) V (3) R (4) Q (.....)
39. What is the correct option which indicates the order of the owner of the vehicles parked in the row indicated as No. ①?
(1) S, Q, R, P (2) T, U, V, S (3) P, Q, R, T (4) S, R, Q, P (.....)
40. What is the correct option which indicates the order of the owner of the vehicles parked in the row indicated as No. ②?
(1) T, U, S, P (2) U, T, Q, R (3) T, U, -, V (4) V, U, -, T (.....)

For rough work



● Questions from No. 41 to 45, are based on a complaint on breaking a window of a house by throwing a stone by someone.

❖ Five suspicious children were questioned. They were Sameera, Ajith, Kamal, Amara and Kumara.

❖ Their answers were

* Sameera said that he did not do it.

* Kamal said that Ajith is the one who broke it.

* Ajith said that it was broken by Kamal.

* Kumara said that it may have been done either by Sameera or Kamal.

* Amara said that it was done by both Kumara and Sameera acting together.

According to the above information select the correct answer for each question and write the **number** of the relevant choice **on the dotted line** given against the question.

41. If **only one of the above statements is true** who could have broken the window?

(1) Ajith (2) Kamal (3) Ajith or Kamal (4) Kumara (.....)

42. If **only two of the statements are true** who could have done it?

(1) Ajith (2) Kamal (3) Kumara (4) Sameera (.....)

43. If **only three of the statements are true** who could have done it?

(1) Sameera (2) Ajith (3) Kamal (4) Kumara (.....)

44. Out of the children who made statements only one was involved with the breaking of the window, how many options are possible for **only one statement to be true** and all the others would be **false**?

(1) 1 (2) 2 (3) 3 (4) 4 (.....)

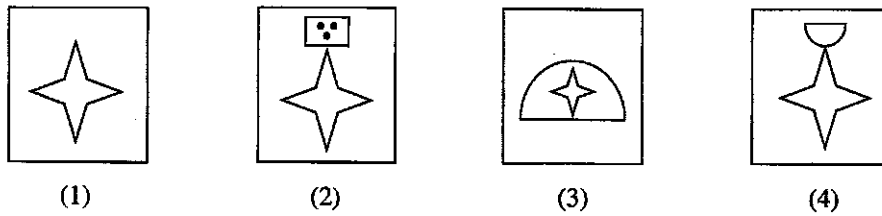
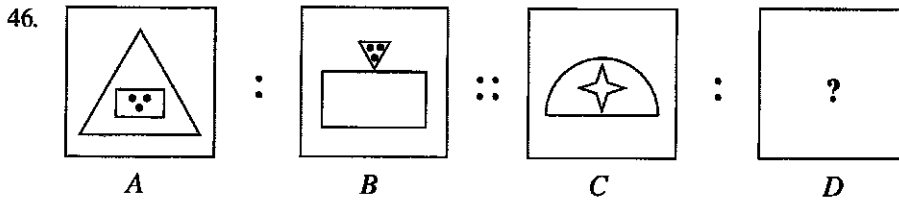
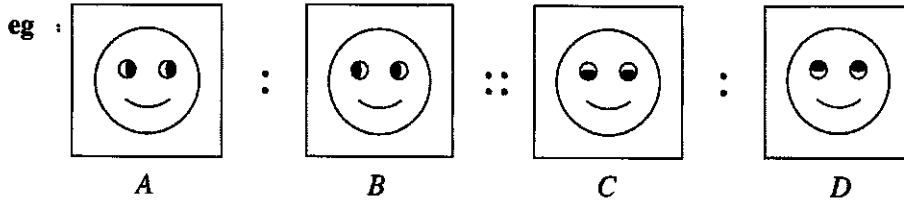
45. Out of the children who made statements only one was involved with the breaking of the window, how many options are possible for **only two statements to be true** and all the others would be **false**?

(1) 1 (2) 2 (3) 3 (4) 4 (.....)

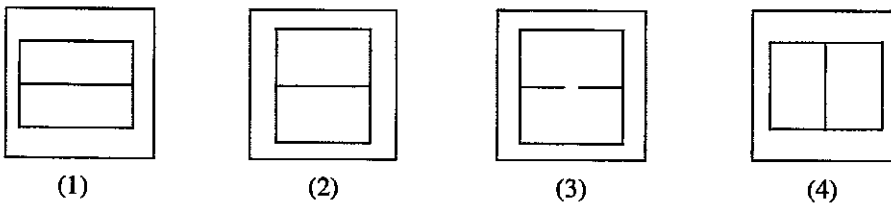
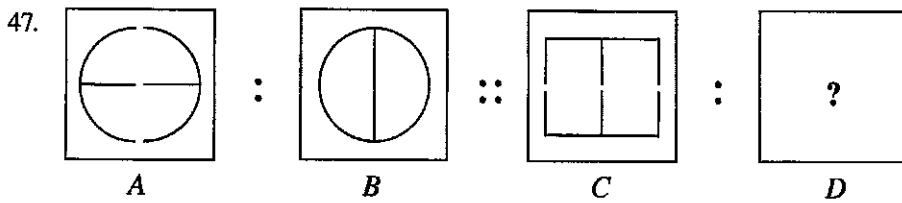
For rough work



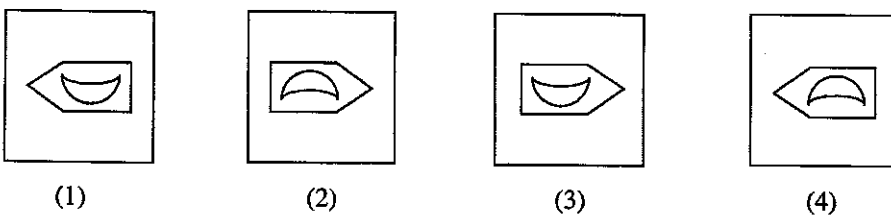
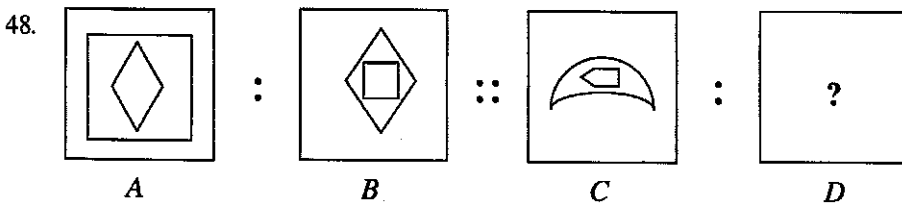
- Questions from No. 46 to 50, consist of two pairs of figures. They are shown in a pattern as $A : B :: C : D$, (B is to A as D is to C .) Study the figures and select the appropriate figure for the place D from the choices given and write the **number** of the relevant choice on the **dotted line** given against the question.



(.....)



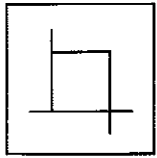
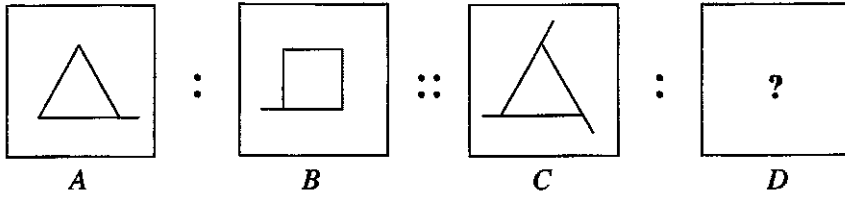
(.....)



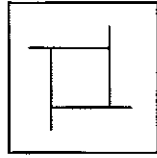
(.....)



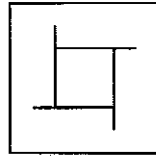
49.



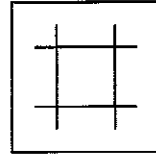
(1)



(2)



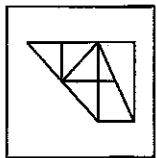
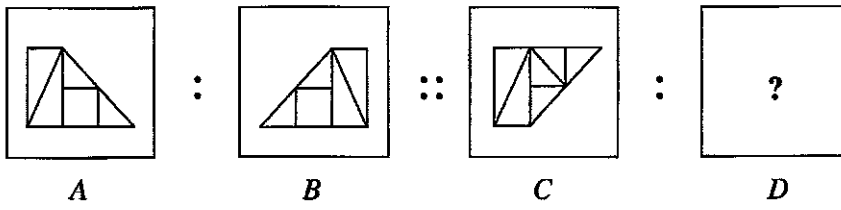
(3)



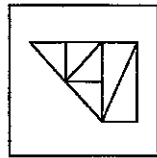
(4)

(.....)

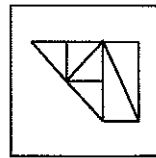
50.



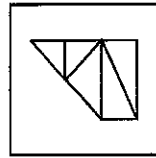
(1)



(2)



(3)



(4)

(.....)

