

ET/SSS/2022(2023)/OL/41/E/Q/S-1



අධ්‍යාපන අමාත්‍යාංශය
கல்வி அமைச்சு
Ministry of Education

G. C. E. Ordinary Level | අ. තො. ස. කාමාන්‍ය සෙල | 2022 (2023)
Student Seminar Series

ශිෂ්‍ය සම්මන්ත්‍රණ මාලාව

Practice Paper | උපකාරක ප්‍රශ්න පත්‍ර

Music(Western) සංගීතය(අපරදිග)



Question Paper - I, II | ප්‍රශ්න පත්‍රය - I, II (English Medium)




Conducted by : Distance Learning Promotion Branch | Content by : Aesthetic Branch

5. Which of the following accidentals is used to raise a flattened note?

- (1) Natural (2) Sharp (3) Double sharp (4) Double flat

6. Which of the following is the Key-signature of E major?



7. Which of the following is the lower tetrachord of D major?

- (1) D, E, F, G (2) A, B, C#, D (3) D, E, F#, G (4) A, B, C, D

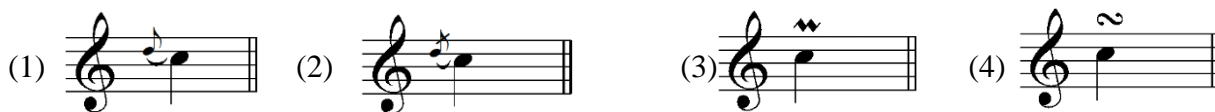
8. What is the tonic minor of G major?

- (1) D minor (2) E minor (3) F minor (4) G minor

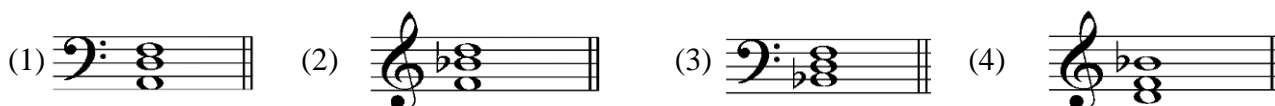
9. Which of the following is a Concordant interval?



10. Which of the following ornament signs represents the given notation?



11. Which of the following triads is the 2nd inversion of the subdominant triad in F major?



12. Which of the following is the correct chord indication for the given triad?



(1) V_4^6

(2) I_4^6

(3) V_3^6

(4) I_3^5

13. Which of the following pair of terms has the opposite meaning?

- (1) Da Capo - Dal Segno (2) Piu mosso - Meno mosso
(3) Allegro - Presto (4) Adagio - Grave

14. Which of the following is the English meaning of the Italian term, *Alla marcia*?

- (1) Duple in minim beats (2) At the performer's pleasure
(3) From the beginning (4) In the style of a march

15. Which of the following melodies is written one octave lower of the given notation?



- (1) (2) (3) (4)

16. Which of the following instruments sounds a major 2nd lower than the written note?

- (1) Horn in F (2) Trumpet in B^b (3) Clarinet in E^b (4) Flute

17. Which of the following is the frequency of the given note?



- (1) 440Hz (2) 256Hz (3) 880 Hz (4) 512 Hz

18. Which illustrates the way the given note is played?

- (1) (2) (3) (4)

19. Which of the following would be the Dominant chord of C minor?

- (1) (2) (3) (4)

20. Which of the following is an interrupted cadence?

- (1) (2) (3) (4)

21. Which of the following compositions is in Rondo form?

- (1) Ash grove (2) Prelude No. 1-Bach
(3) Fur Elise - Beethoven (4) Harmonious Blacksmith-Handel

22. Which of the following is known as the episodic form?

- (1) Binary (2) Ternary (3) Sonata (4) Variation

23. Which animal's traits are described in 'Gajaga Vannama'?

- (1) Eagle (2) Horse (3) Elephant (4) Peacock

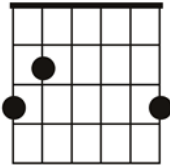
24. Which of the following is a correct statement?

- (1) Tone is the shortest distance between two notes.
- (2) The Enharmonic Equivalent of the tuning note of the orchestra is G double sharp
- (3) Diatonic semitone contains notes with the same letter names
- (4) Chromatic semitone contains different letter names.

25. Which of the following Musicians are associated with Sri Lankan light songs?

- (1) Lakshmi Bhai, Ellen Ratnayake
- (2) Ananda Samarakoon, Sunil Shantha
- (3) Clarence Wijewardhana, Rookantha Gunethilaka
- (4) Philippu Singho, C Don Bastian

26. Which of the following chords is indicated by the given guitar chord diagram?



- (1) G major
- (2) E minor
- (3) C major
- (4) F major

27. Which of the following Oriental notation is equal to the mediant and 'Ti' of G Harmonic minor respectively?

- (1) ४', ॐ'
- (2) ८', ७'
- (3) ८, ७
- (4) ५, ॐ'

28. Which of the following groups of instruments consist only definite pitch percussion instruments?

- (1) Tabular Bells, Gong
- (2) Triangle, Cymbal
- (3) Timpani, Xylophone
- (4) Side Drum, Timpani

29. Hautbois is,

- (1) a transposing, single reed instrument.
- (2) a transposing, double reed instrument
- (3) a non-transposing, double reed instrument
- (4) a non-transposing, single reed instrument

30. Which of the following instruments uses a slide to change notes?

- (1) Tuba
- (2) French Horn
- (3) Trumpet
- (4) Trombone

31. Which of the following set of instruments is used by the front row of a typical jazz band?

- (1) Trumpet, Trombone, Clarinet
- (2) Trombone, French horn, Piccolo
- (3) Trumpet, Clarinet, Flute
- (4) Clarinet, Piano, French horn


32. Which of the following is often a setting of a sacred story for soloists, chorus, and orchestra?

- (1) Symphony
- (2) Oratorio
- (3) Opera
- (4) Concerto

33. Which of the following works is performed by a chamber group?

- (1) Trout quintet
- (2) Trumpet concerto
- (3) 1812 overture
- (4) Surprise symphony

- (i) Name the key of the piece of music. (01 mark)
.....
- (ii) Insert the correct time signature in the appropriate places in the score. (01 mark)
- (iii) In which degree of the scale does the music piece begin? (01 mark)
.....
- (iv) Name the Interval marked with a bracket (⌈) in bar 12. (01 mark)
.....
- (v) This music extract should be played 'at an easy pace'. Write the appropriate tempo indication at the correct place in the score. (01 mark)
- (vi) Name the cadence that ends the piece. (01 mark)
.....
- (vii) Give two articulation signs found in this music extract. (01 mark)
1..... 2.....
- (viii) Name two dynamic signs appearing in this piece. (01 mark)
1..... 2.....
- (ix) Write the chord indication of the bracketed chord marked A in bar 09. (01 mark)
.....
- (x) Name an Ornament found in this music score. (01 mark)
.....
- (xi) Write the given treble part one octave lower in the Bass clef. (02 marks)



4. (i) Complete the following cadences adding the necessary parts. (06 marks)

- (ii) Name the key and describe the chords marked A, B, C. (06 marks)

Key: -----

5. (i) Complete the melody by adding an answering phrase in the same style to make an eight bar melody. Add suitable marks of tempo, phrasing and dynamics to complete the melody. (06 marks)

- (ii) Convert the following oriental notation to western notation and harmonize the melody using primary triads. (06 marks)

සරි ගුරි ස ග | ධනි ස ම ස | නි රි පධ නි | ස _ _ _

6. (i) Compose a rhythm on a monotone of not more than eight bars to the following words. Write each syllable clearly under the note or notes to which it belongs.

The sun set glows in splendor,

To wave a bright farewell.

As day departs in glory

All over hill and dell.

Handwriting lines for composing a monotone rhythm. Each line consists of a solid top line, a dashed middle line, and a solid bottom line.

(ii) Rewrite this tune in the one octave lower in the Bass clef. (04 marks)

Blank musical staff lines for rewriting the tune in the bass clef.

7.

(i) Write the name of the composer, period and the type of the following compositions. (06 marks)

	Composition	Composer	Period	Type of work
1	Lohengrin			
2	Moonlight Sonata			
3	Water Music			
4	Rite of spring			

(ii) Name the instruments in a String Quartet. (02 mark)

.....

(iii) Briefly describe one of the instruments from the string quartet.

(04 marks)

.....

.....

.....

.....

.....

.....
