

Provincial Department of Education NWP


Practice paper 2023 (2024)

Western music

1 st Paper

1 Hour

1. Which of the following is the total number of beats of silence in the phrase of the music given below ?



- i. 6 ii. $6\frac{1}{2}$ iii. 7 iv. $7\frac{1}{2}$

2. Which of the following would be the inversion of major 2nd

- i. Major 7th ii. Minor 7th iii. Perfect 7th iv. Augmented 7th

3. Which of the following would be a Diatonic Semitone above the given note? D[#]



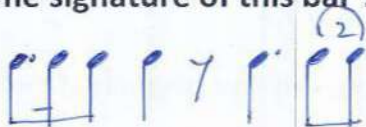
4. How many tetrachords are there in a scale ?

- i. Two ii. One iii. Three iv. Four

5. Which of the following would be the number of Semitones ,between the key note of a Major scale and the keynote of its relative minor ?

- i. 2 ii. 3 iii. 1 iv. 4

6. What is the time signature of this bar ?







- i. 6 ii. 12 iii. 12 iv. 4
16 16 8 8


7. In a minor scale the Dominant Triad is a

- i. Diminished Triad ii. Minor Triad iii. Major Triad iv. Augmented Triad

8. Which of the following is a Primary Triad of C major ?

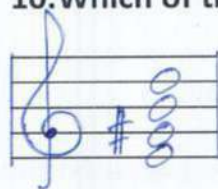



i.  ii.  iii.  iv. 

9. What would be the chord indication for the given example ?



- i. V b ii. ii b iii. iv iv. Vc

10. Which of these would be the Dominant 7th chord of E major ?

i.  ii.  iii.  iv. 

11. The English meaning of "Piu Mosso" would be,

- i. Slower at once / Less moved
 ii. Hurrying the speed / Gradually becoming faster
 iii. Quicker at once / More moved
 iv. Strengthening the tone / Medium tone

12. Which option gives the Bass notes of the Imperfect cadence of B Major ?

- i. F Sharp - B ii. E - B iii. B - F Sharp iv. F - B

13. What is the name given to a group of five players performing together ?

- i. Quintet ii. Septolet iii. Quartet iv. Octet

14. Waltz in D flat major is also known as ,

- i. The Blue Danube Waltz
- ii. Tules of the Vienna woods
- iii. The Minute Valse
- iv. Waltz of the flowers

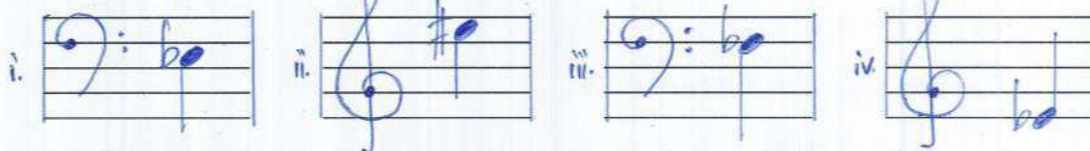
15. The composer of the "Young Person's Guid to the Orhestra" is

- i. Debussy
- ii. Gershwin
- iii. Prokofiev
- iv. Britten

16. Which of the following composition is written in Rondo Form ?

- i. Handel – Harmonious Blacksmith
- ii. Beethoven – Fur Elise
- iii. Buch – Prelude and Fugue No 1
- iv. Beethoven – Minuet G

17. What would be \ominus in Western Notation ?



18. Which of the following notes are not found in Bhupoli Raga ?

- i. IV and VII
- ii. V and VII
- iii. II and V
- iv. IV and VI

19. Which of the following belongs to a Vannama ?

- i. Premayen manaranjitha
- ii. Ale Benda Mage Ramyawan
- iii. Gambeera Thedathi
- iv. Sath weth mahath Adara

20. Which of the following is an internationally recognized Sri Lankan composer who combined Sinhala folk tunes, Hindusthni music and Western music in his compositions ?

- i. Ananda Samarakoon
- ii. Sunil Shantha
- iii. Dr. Premasiri Kemadasa
- iv. Mohideen Baig

21. Which of the following nurthi was written by John Silva ?

- i. Othello
- ii. Pandukabhaya
- iii. Ramayanaya
- iv. Vidura

22. Which of the following instruments is not a regular member of the Symphony Orchestra ?

- i. Piccolo ii. Oboe iii. Viola iv. Saxophone

23. Which of the following would be the sitting order in general of the four sections of instruments of a Symphony Orchestra ?

- i. Strings , Woodwind , Percussion , Brass Wind
ii. Strings , Brass Wind , Woodwind , Percussion
iii. Strings , Brass Wind , Percussion , Woodwind
iv. Strings, Woodwind , Brass wind , Percussion

24. Which of the following pairs of instruments sound a perfect 5th lower ?

- i. Cor Anglais / Trumpet in B flat
ii. Picolo / Oboe
iii. Clarinet in A / Flute
iv. Cor anglais / Horn in F

25. Duke Ellington was associated with

- i. Blues ii. Swing iii. Be bop iv. Jazz

26. Which of the following is used to record , editor play back music ?

- i. Sequencer ii. Synthesizer iii. Sampler iv. Digital keyboard

27. A song by the Beatles would be

- i. You raise me up
ii. Flow Gently Sweet Afton
iii. Yesterday
iv. When the saints Go Marching in

28. Who built a theatre to perform his own Operas ?


- i. Verdi ii. Schumann iii. Berlioz iv. Wagner

29. Which of the following is the correct way of the playing the following Ornament ?

The image shows a musical staff with a treble clef and a single note on the second line (F4). Above the note is a handwritten blue wavy line with a sharp sign (#), representing an ornament. Below the staff are four options (i, ii, iii, iv) showing different ways to play this note with ornaments:

- i. A quarter note with a mordent.
- ii. A quarter note with a mordent and a grace note.
- iii. A quarter note with a mordent and a grace note.
- iv. A quarter note with a mordent and a grace note.

30. Which of the following is the correct number of vibrations per second of the given note?



- i. 128Hz ii. 256Hz iii. 440Hz iv. 880Hz

31. Which of the following is not a characteristic of modern music ?

- i. Chromatic Harmony
ii. Syncopated Rhythms
iii. Unusual Sound effects
iv. More than one melody at a time.

32. An example for programme Music would be

- i. Chromatic Harmony
ii. Syncopated Rhythms
iii. Unusual Sound effects
iv. More than one melody at a time.

33. Which of the following instrument play the music to characterize the cat in "Peter and the Wolf" ?

- i. Oboe ii. French Horn iii. Basson iv. Clarinet


34. How many strings would a standard Bass guitar have ?

- i. 7 ii. 6 iii. 5 iv. 4

35. Which of these is not a ballet ?

- i. Liebestruus ii. Petroushka iii. Swan Lake iv. Sleeping Beauty

36. Which of the following will describe the given interval ?



- i. Chromatic Semitone
ii. Diatonic Semitone
iii. Unison
iv. Enharmonic Equivalent

37. Which of the following would be a light song ?

- i. Auley benda maugé
- ii. Suwanda Padma
- iii. Wasana Deneki
- iv. Ase Madura Jeevanaye

38. Which of these can be also be used as a practice pedal in a Pianoforte ?

- i. Una Corda
- ii. Sostenuito Pedal
- iii. Soft Pedal
- iv. Damper Pedal

39. Who is recognized for making "baila" grow into a wellknown Sri Lankan popular music form ?

- i. M.S.Fernando
- ii. C.T.Fernando
- iii. Clearence Wijewardana
- iv. Wally Bastiansz

40. Which of the following is written in the same pitch as the given note ?

The reference note is a G4 (second line of the bass clef). The options are:

- i. Treble clef, second space (D5)
- ii. Bass clef, second space (G4)
- iii. Treble clef, second space (D5)
- iv. Bass clef, second space (G4)

Provincial Department of Education- NWP

Practice Paper – 2023 (2024)

Grade 11

WESTERN MUSIC – II

Two hours

Answer Five Questions including question No 1 and selecting two questions from each of the part A and B on this paper it Self.

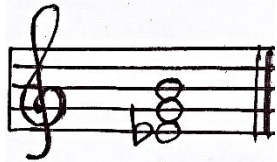
(01) Study the musical extract given below and answer the questions.

- (i) Write the full name of the Composer? (1 mark)
- (ii) In which key does the music begin? (1 mark)
- (iii) Name the Relative major or minor of it (1 mark)
- (iv) Explain the time – Signature of this music extract? (1 mark)
- (v) All the notes in bar 12 and bar 13 can be found in the key of (major / minor) (1 mark)
- (vi) Write the time name of the longest note in the extract? (1 mark)
- (vii) Write the technical name of the note marked as A (1 mark)
- (viii) Write the chord indication of the bracketed chord X? (1 mark)
- (ix) Briefly describe the Irregular note group used in the music extract?.....
..... (2 marks)
- (x) Write 2 dynamic marks found in this music extract?
 - (a)
 - (b) (2 marks)

PART – A

Answer any two questions

- 02) (i)** Name the harmonic minor scale in which the given triad can be found. write in the G clef with key – Signature ascending and descending in crotchets. mark Semi tones with slurs.




Name :- harmonic minor




(4 marks)

- (ii)** Transpose the given melody an Octave lower in the Bass clef and add correct accidentals to make this melody sound in E^b major (4 marks)



- (iii)** Write the following triads. Using the correct key – Signature (2 x 2 = 4)


- (a) 2nd inversion, Tonic triad of B^b major
 (b) Root position, Dominant triad of F[#] minor



- 03) (i)** With out changing the effect Convert the music extract to Compound time. insert the new time Signature (3 marks)



- (ii)** Re -Write the given melody grouping the notes and rests according to the given time Signature (5 marks)




(iii) Match A with B

- A
- (a) Rondo from
 - (b) Pop Song
 - (c) Ternary from
 - (d) Calypso Song
 - (e) Musical
 - (f) Binary from
 - (g) Rounds
 - (h) Variation from

- B
- (1) Kookaburra
 - (2) Baa baa Black Sheep
 - (3) I have a dream
 - (4) Harmonious Black Smith
 - (5) Whispering hope
 - (6) Fur Elise
 - (7) Island in the Sun
 - (8) Three blind Mice
 - (9) Far Beyond the star
 - (10) Oh Susanna
- $\frac{1}{2} \times 8 = 4$ marks

04) (i) Write the following Cadences (answer any 02) (2 x 3 = 6 marks)



Imperfect
cadence in
D minor with
Key - Signature

Interrupted
Cadence in F
major with out key
Signature

$V^7 - I$
G major
with key
Signature


ii) Complete the melody by adding an answering phrase in the same style add suitable marks of tempo, phrasing and dynamics to the complete melody (6 marks)



PART – B

Answer any two questions

05) (i) Convert the given Western notation to Oriental notation (4 marks)



(ii) Add Alto, Tenor and Bass parts to the following melody, and double the root in every chord. (4 marks)

(4 marks)

(iii) Explain four of the following.

- Dolce -
- Vivace -
- Rubato -
- Presto -


(4 marks)

06) (i) Answer the following questions.

- (a) Who is the Concert master in the Orchestra?
- (b) The technique which uses to play 'Trombone' is
- (c) Transposing Instrument in the wood – wind Section is,
- (d) The largest Instrument in the String Section is,
- (e) Another name to the ' Bassoon is,
- (f) Indefinite pitch Instrument in percussion Section is,

(1 x 6 marks)

(ii) Re- write the following exactly as they should be played.



(2x3= 6 marks)

07) (i) Complete this Grid

	Composition / Work	Composer	Type of work
a	Choral Symphony
b	Messiah
c	Creation
d	Magic Flute
e	Lohengrin
f	Clock Symphony

$\frac{1}{2} \times 12 = 6$ marks

(ii) Complete the Grid with correct Answer

	Name of the Group	Number of players	Instruments
a	String trio
b04.....	Violin
c	Piano
d	Piano trio
e05.....	Clarinet
f	Trumpet quintet

$\frac{1}{2} \times 12 = 6$ marks